
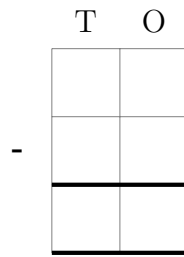
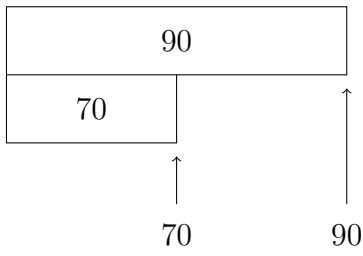


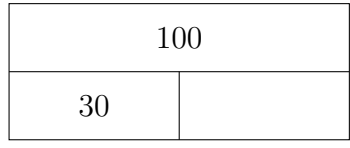
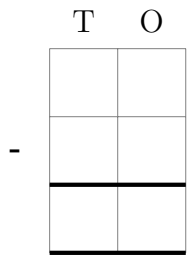
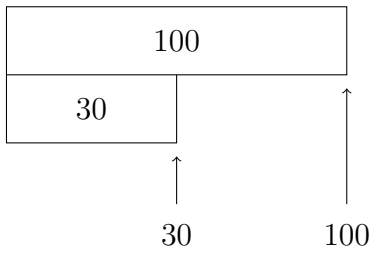
1. Complete the calculation  $90 - 70 = \dots\dots\dots$

You **must** show your workings out.



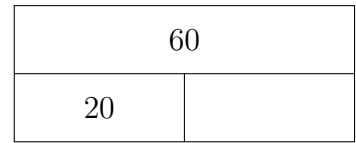
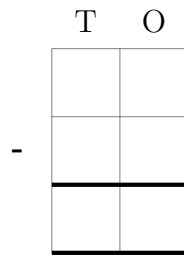
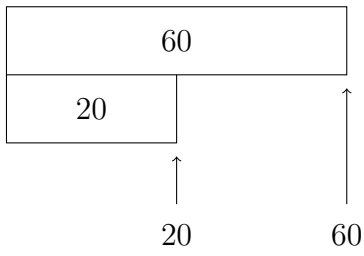
2. Complete the calculation  $100 - 30 = \dots\dots\dots$

You **must** show your workings out.



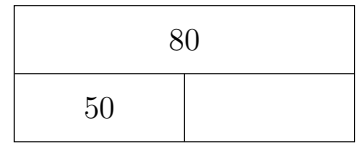
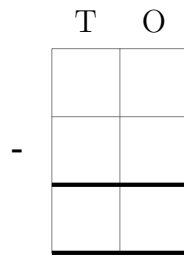
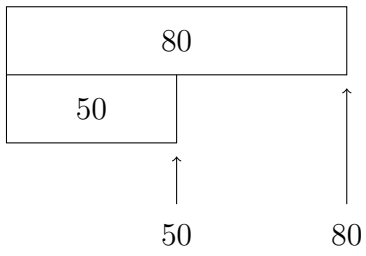
3. Complete the calculation  $60 - 20 = \dots\dots\dots$

You **must** show your workings out.



4. Complete the calculation  $80 - 50 = \dots\dots\dots$

You **must** show your workings out.



## Answers

1. 20
2. 70
3. 40
4. 30