

1. Complete the calculation $39 - 9 = \dots\dots\dots$

You **must** show your workings out.

9	39	-	T	O		30	9
9	39						
9	39						

2. Complete the calculation $47 - 2 = \dots\dots\dots$

You **must** show your workings out.

47			
2			

↑ ↑

2 7

↑

47

-

T O

40	7
	2

3. Complete the calculation $26 - 4 = \dots\dots\dots$

You **must** show your workings out.

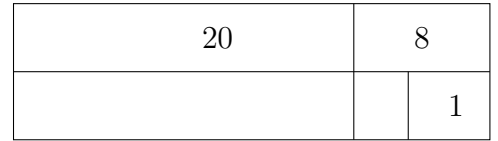
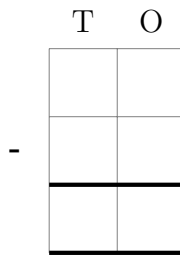
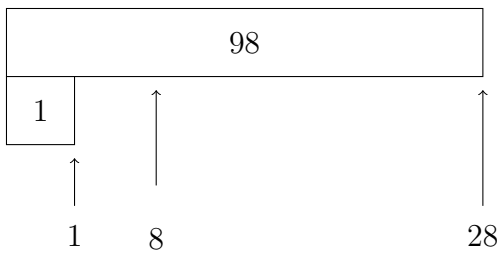
4			26	
↑	↑		↑	
4	6		26	

T	O

20	6
	4

4. Complete the calculation $28 - 1 = \dots\dots\dots$

You **must** show your workings out.



Answers

1. 30
2. 45
3. 22
4. 27