



1. Complete these calculations

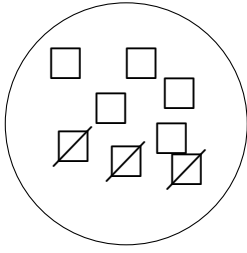


(i) $6 - 4 = \dots$

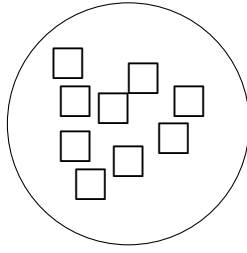


(ii) $9 - 3 = \dots$

2. Complete these calculations




(i) $8 - 3 = \dots$




(ii) $9 - 5 = \dots$

3. Complete these calculations




(i) $9 - 3 = \dots$




(ii) $6 - 5 = \dots$

4. Complete these calculations



(i) $7 - 2 = \dots$



(ii) $5 - 1 = \dots$

Answers

1. (i) 2 (ii) 6
2. (i) 5 (ii) 4
3. (i) 6 (ii) 1
4. (i) 5 (ii) 4