



1. Complete these calculations



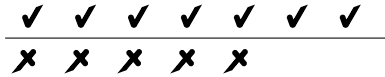
(i) $9 - 3 = \dots$



(ii) $6 - 5 = \dots$

2. Complete these calculations

(i) $7 - 5 = \dots$




(ii) $8 - 2 = \dots$



3. Complete this calculation.

You may use either diagram to help you.

(i) $7 - 4 = \dots$



4. Complete this calculation $6 - 4 = \dots$