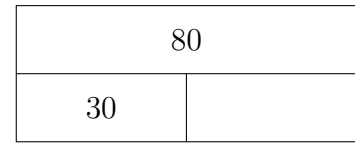
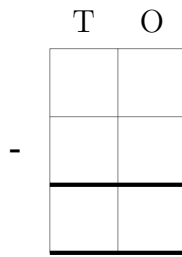
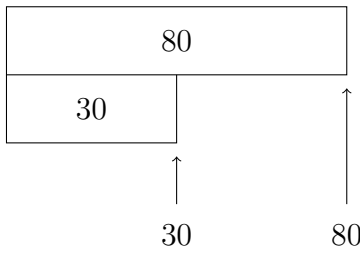


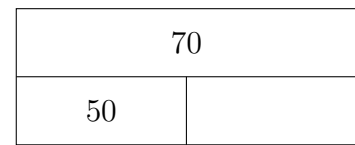
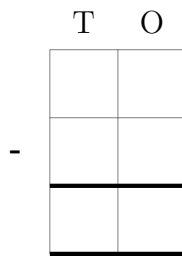
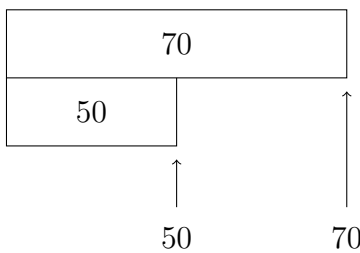
1. Complete the calculation $80 - 30 = \dots\dots\dots$

You **must** show your workings out.



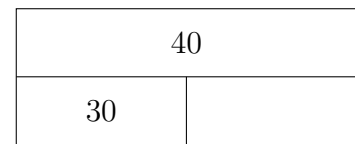
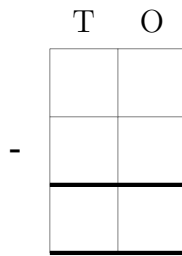
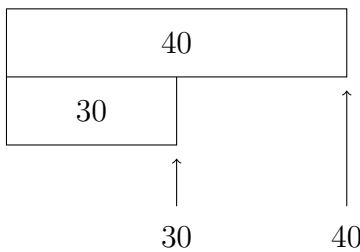
2. Complete the calculation $70 - 50 = \dots\dots\dots$

You **must** show your workings out.




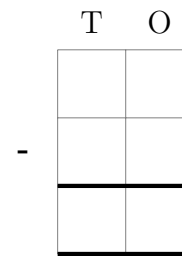
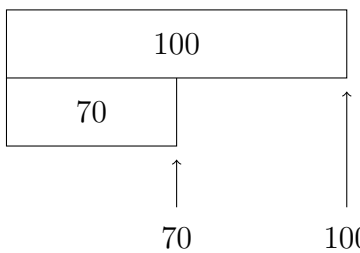
3. Complete the calculation $40 - 30 = \dots\dots\dots$

You **must** show your workings out.



4. Complete the calculation $100 - 70 = \dots\dots\dots$

You **must** show your workings out.



Please turn over for more questions and answers

5. Complete the calculation $90 - 30 = \dots\dots\dots$

You **must** show your workings out.

100	
30	

T O

100	
30	

T O

100	
30	

6. Complete the calculation $60 - 50 = \dots\dots\dots$

You **must** show your workings out.

60	
50	

T O

60	
50	

7. Complete the calculation $100 - 40 = \dots\dots\dots$

You **must** show your workings out.

100	
40	

T O

100	
40	

8. Complete the calculation $50 - 20 = \dots\dots\dots$

You **must** show your workings out.

50	
20	

T O

50	
20	

Answers Q1: 50, Q2: 20, Q3: 10, Q4: 30, Q5: 60, Q6: 10, Q7: 60, Q8: 30