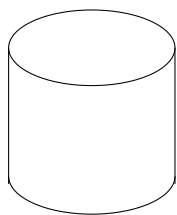
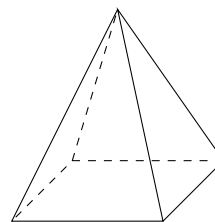


1. Write down the mathematical names of each of these 3-D shapes.

(i)



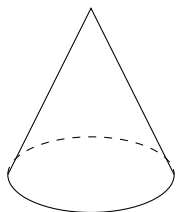
(ii)



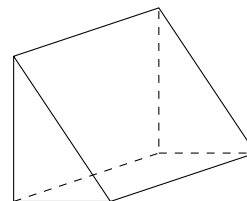
(i) (ii)

2. Write down the mathematical names of each of these 3-D shapes.

(i)



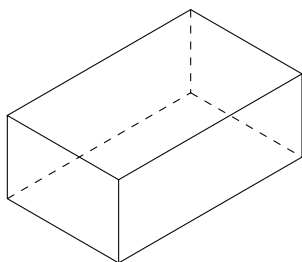
(ii)



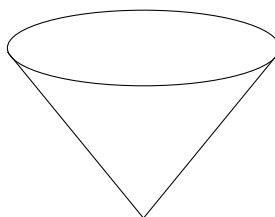
(i) (ii)

3. Write down the mathematical names of each of these 3-D shapes.


(i)



(ii)



(iii)

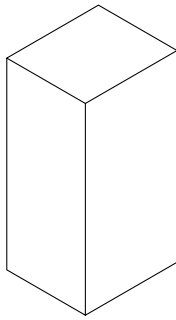


(i) (ii) (iii)

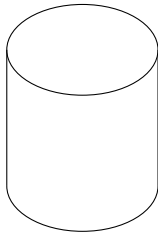
4. Here are 5 solid shapes.

Match each solid shape to its mathematical name.

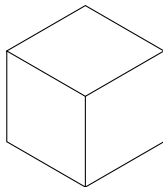
One has been done for you.



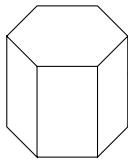
Cylinder



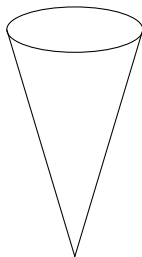
Hexagonal prism



Cone



Cuboid



Cube

Answers

1. (i) cylinder (ii) (square based) pyramid
2. (i) cone (ii) (triangular) prism
3. (i) cuboid (ii) cone (iii) sphere
4. 1st - cuboid
2nd - cylinder
3rd - cube
4th - matched
5th - cone