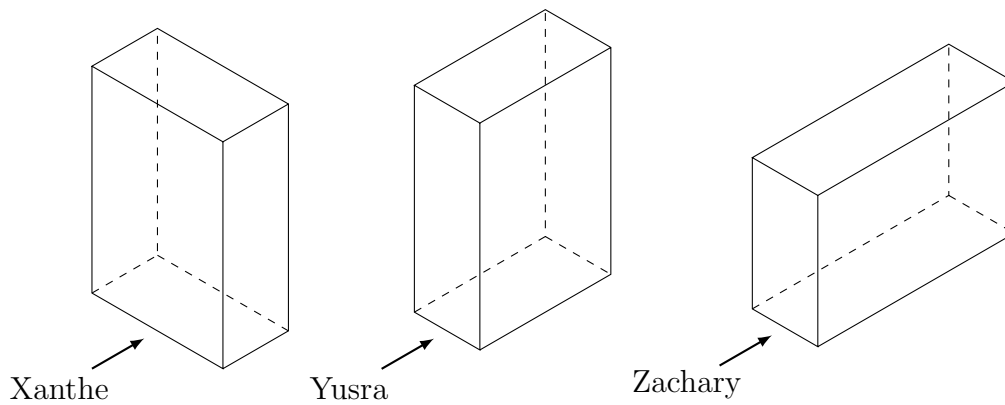
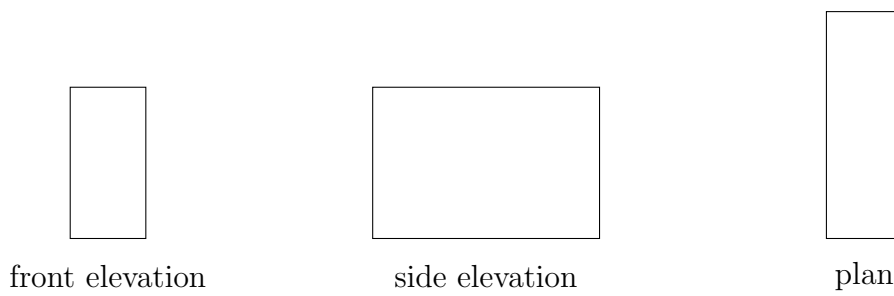


1. Three students draw the front elevation, side elevation and plan of a cuboid.
 Each student was facing their cuboid in the direction of the arrow, shown below.



Here is the work of one of the students.



This student's work is correct.

Write down the name of this student.

1.

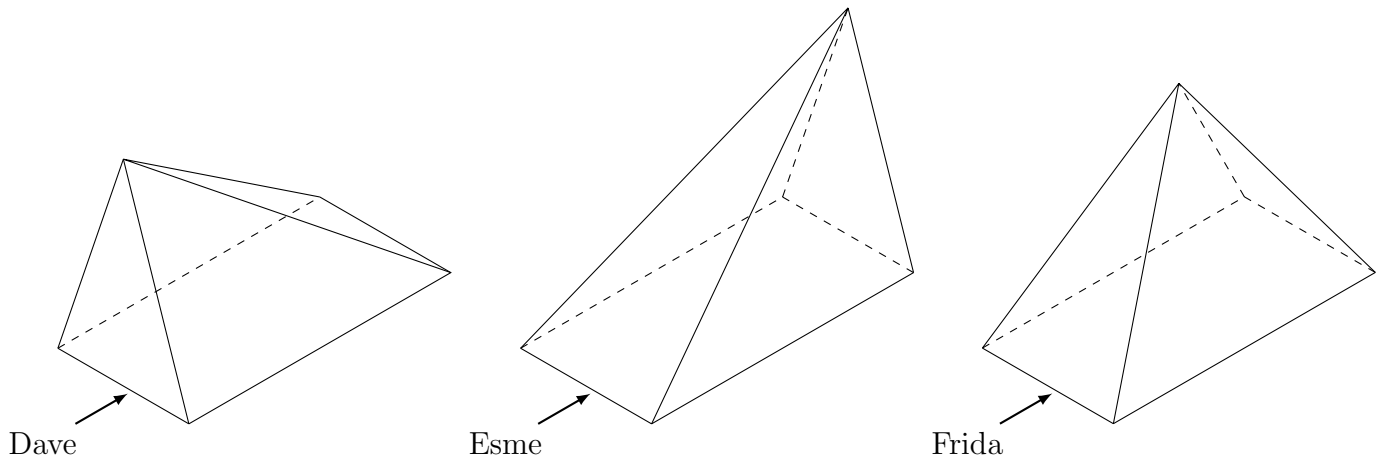
2. Here are 4 solid shapes.

Match each solid shape to its plan, front elevation and side elevation.

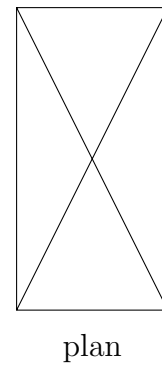
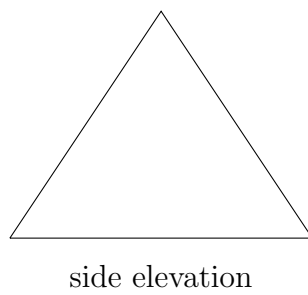
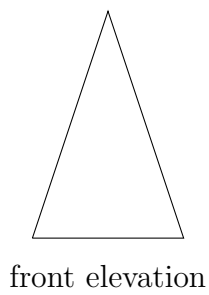
One has been done for you.

<p>plan</p>	<p>front elevation</p>	<p>side elevation</p>	
<p>plan</p>	<p>front elevation</p>	<p>side elevation</p>	
<p>plan</p>	<p>front elevation</p>	<p>side elevation</p>	
<p>plan</p>	<p>front elevation</p>	<p>side elevation</p>	

3. Three students draw the front elevation, side elevation and plan of a pyramid.
 Each student was facing their pyramid in the direction of the arrow, shown below.



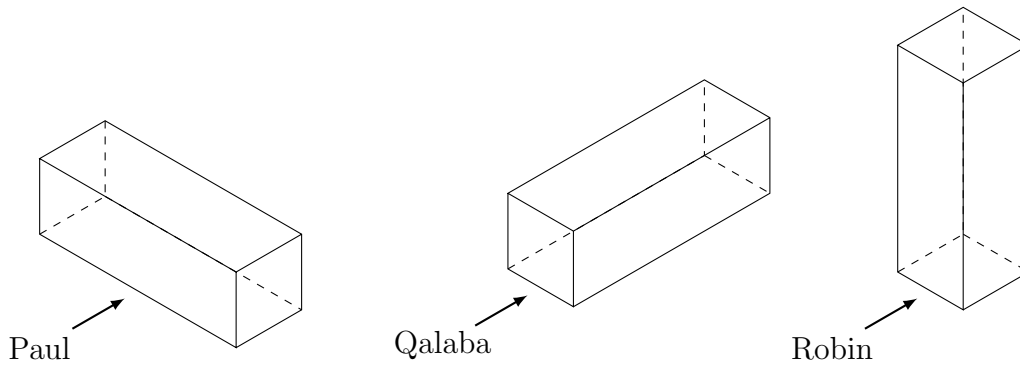
Here is the work of one of the students.



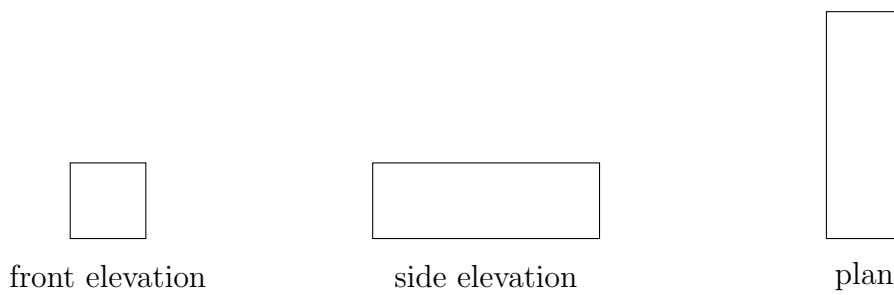
This student's work is correct.
 Write down the name of this student.

3.

4. Three students draw the front elevation, side elevation and plan of a cuboid.
 Each student was facing their cuboid in the direction of the arrow, shown below.



Here is the work of one of the students.



This student's work is correct.
 Write down the name of this student.

4.

Answers

1.

1. ..Zachary..

2. top - upper middle
upper middle - top
lower middle - bottom
bottom - matched

3.

3. ... Frida ...

4.

4. ... Qalaba ...