




1. Use the information below to complete the sentence.


A square  is a 2D shape it is flat


A cube  is a 3D shape it is solid

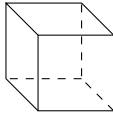
A rectangle  is a shape it is

Choose from the words 2D 3D flat solid

2. Use the information below to complete the sentence.

A circle  is a 2D shape it is flat

A sphere  is a 3D shape it is solid

A cube  is a shape it is

Choose from the words 2D 3D flat solid

Answers

1. **2D, flat**
2. **3D, solid**