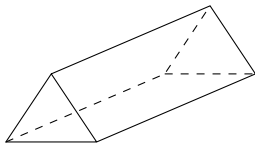


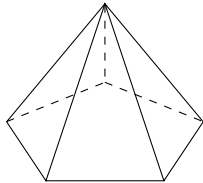
1. Here are 5 solid shapes.

Match each solid shape to its mathematical name.

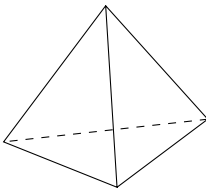
One has been done for you.



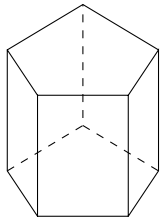
Pentagon based pyramid



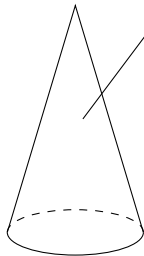
Cone



Pentagonal prism



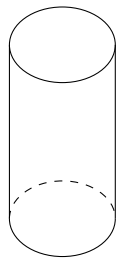
Triangular prism



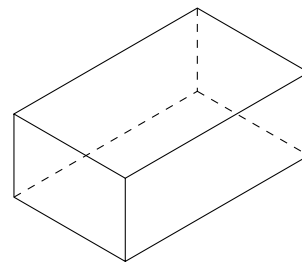
Triangular based pyramid

2. Write down the mathematical names of each of these 3-D shapes.

(i)



(ii)




(i) (ii)

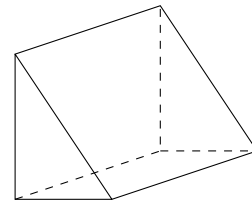
Answers Q1: 1st - triangular prism; 2nd - pentagon based pyramid; 3rd - triangular based pyramid; 4th - pentagonal prism; 5th - cone Q2; i) cylinder (ii) cuboid

3. Write down the mathematical names of each of these 3-D shapes.

(i)



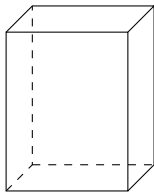
(ii)



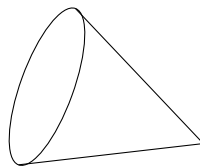
(i) (ii)

4. Write down the mathematical names of each of these 3-D shapes.

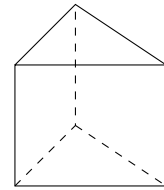
(i)



(ii)



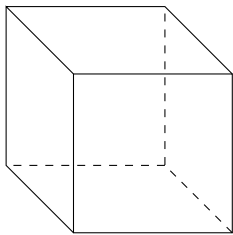
(iii)




(i) (ii) (iii)

5. Write down the mathematical names of each of these 3-D shapes.

(i)



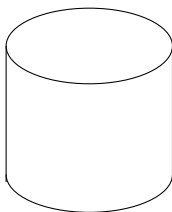
(ii)



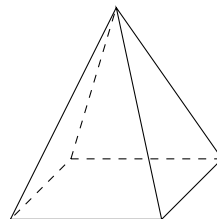
(i) (ii)

6. Write down the mathematical names of each of these 3-D shapes.

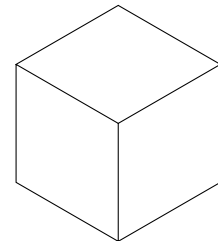
(i)



(ii)



(iii)



(i) (ii) (iii)

Answers Q3: (i) sphere, (ii) triangular prism, Q4 (i) cuboid (ii) cone (iii) triangular prism
Q5 (i) cube (ii) sphere, Q6: (i) cylinder (ii) square based pyramid (iii) cube