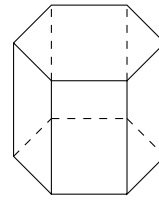
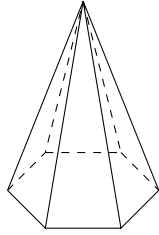
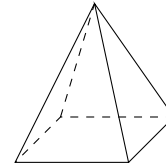
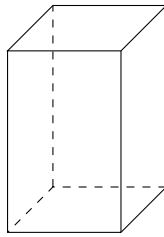


1. Write down the mathematical names of these solids.



(i) (ii)

2. Write down the mathematical names of these solids.



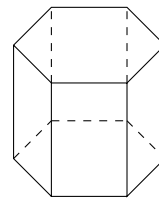
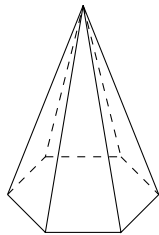
(i) (ii)

3D (6) Answers (1) (i) hexagonal based pyramid (ii) hexagonal prism

(2) (i) cuboid (ii) square based pyramid (3) (i) triangular pyramid (ii) triangular prism

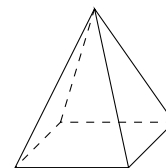
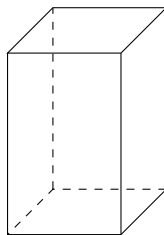
(4) (i) pentagonal prism (ii) pentagonal based pyramid

1. Write down the mathematical names of these solids.



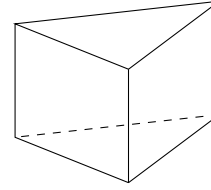
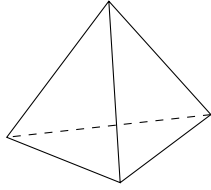
(i) (ii)

2. Write down the mathematical names of these solids.



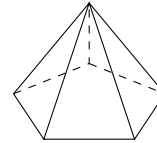
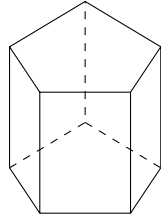
(i) (ii)

3. Write down the mathematical names of these solids.



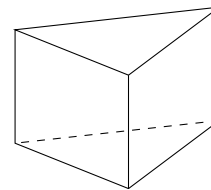
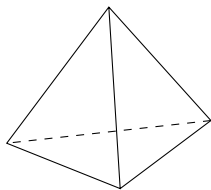
(i) (ii)

4. Write down the mathematical names of these solids.



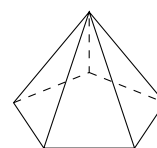
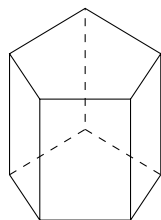
(i) (ii)

3. Write down the mathematical names of these solids.



(i) (ii)

4. Write down the mathematical names of these solids.



(i) (ii)