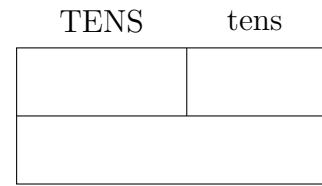
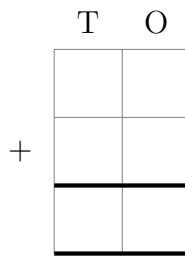
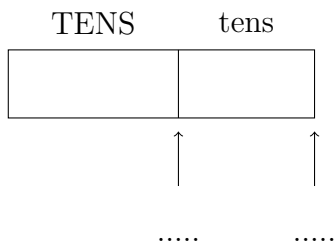


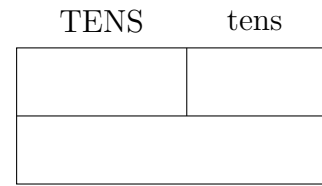
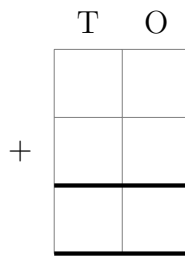
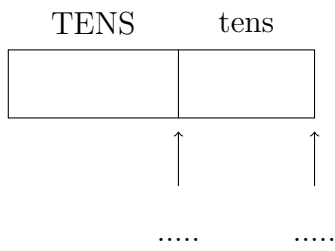
1. Complete the calculation $40 + 30 = \dots\dots\dots$

You **must** show your workings out.



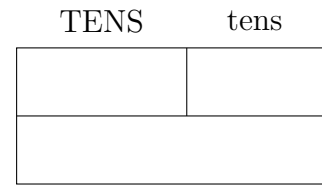
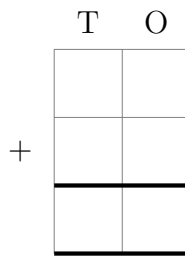
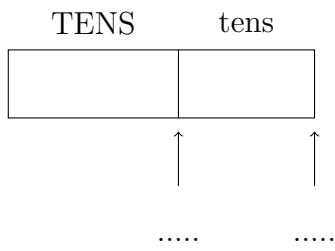
2. Complete the calculation $80 + 20 = \dots\dots\dots$

You **must** show your workings out.



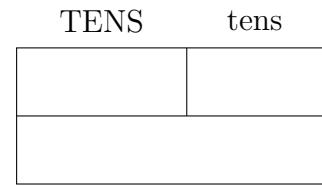
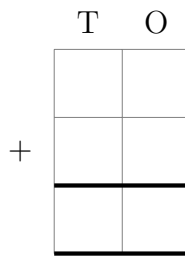
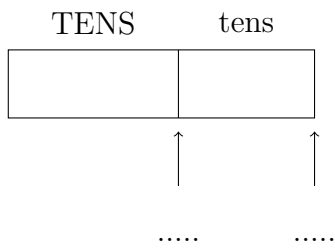
3. Complete the calculation $30 + 20 = \dots\dots\dots$

You **must** show your workings out.



4. Complete the calculation $30 + 70 = \dots\dots\dots$

You **must** show your workings out.



Answers

- 1.
- 2.
- 3.
- 4.