



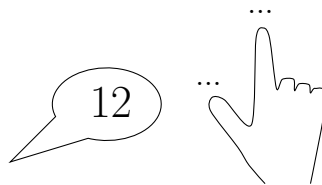
1. Complete the calculation $17 + 3 = \dots$




2. Complete the calculation $18 + 6 = \dots$



3. Complete the calculation $12 + 2 = \dots$



4. Complete the calculation $17 + 5 = \dots$



Answers

1. 20
2. 24
3. 14
4. 22