
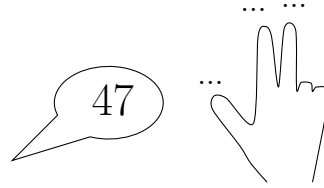



1. Complete the calculation $56 + 6 = \dots$




2. Complete the calculation $47 + 3 = \dots$



3. Complete the calculation $39 + 8 = \dots$



4. Complete the calculation $67 + 4 = \dots$



Answers

1. 62
2. 50
3. 47
4. 71