
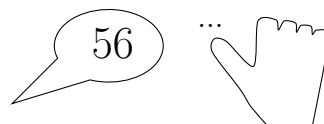


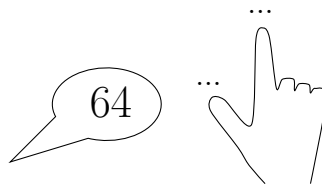
1. Complete the calculation $34 + 1 = \dots$



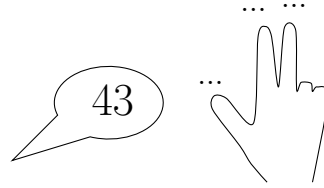
2. Complete the calculation $56 + 1 = \dots$



3. Complete the calculation $64 + 2 = \dots$



4. Complete the calculation $43 + 3 = \dots$



Answers

1. 35
2. 57
3. 66
4. 46