




1. Complete the calculation $5 + 4 = \dots$



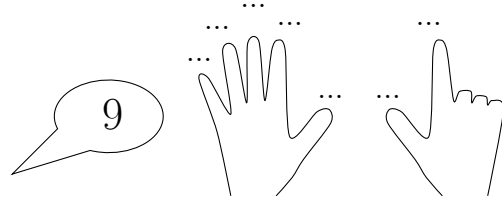
2. Complete the calculation $8 + 7 = \dots$



3. Complete the calculation $9 + 4 = \dots$



4. Complete the calculation $9 + 7 = \dots$



Answers

1. 9
2. 15
3. 13
4. 16