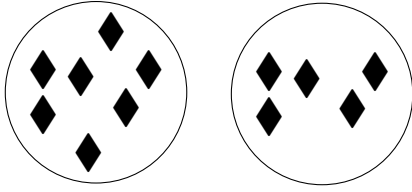



1. Complete this calculation.




$$7 + 5 = \dots\dots$$

2. Complete the sum



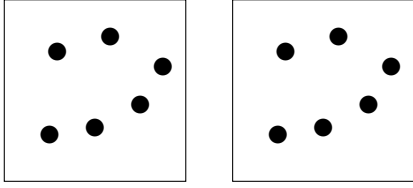
$$6 + 5 = \dots\dots$$

3. Complete the calculation



$$9 + 2 = \dots\dots$$

4. Complete this calculation.



$$6 + 6 = \dots\dots$$

Answers

1. 12
2. 11
3. 11
4. 12