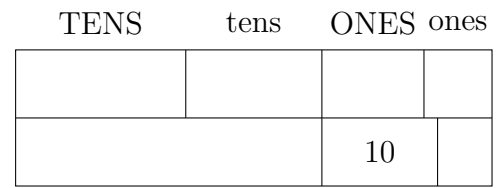
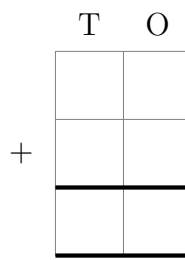
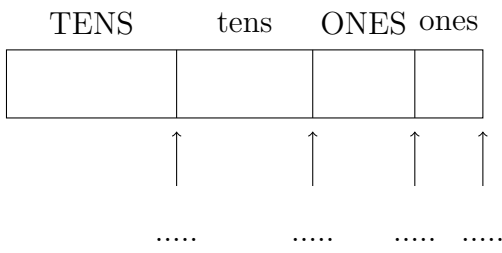


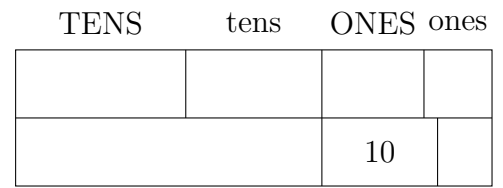
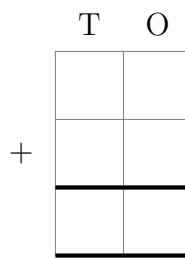
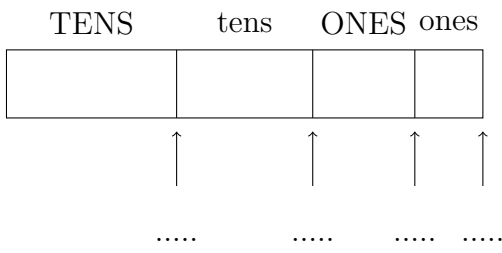
1. Complete the calculation  $27 + 54 = \dots\dots\dots$

You **must** show your workings out.



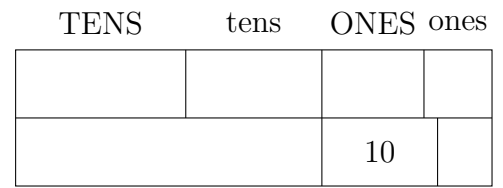
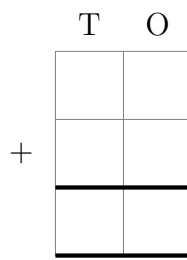
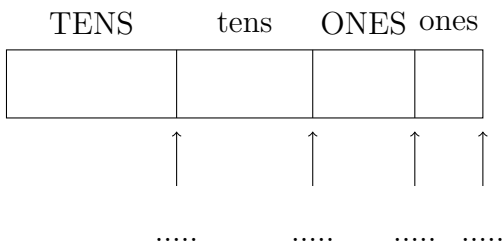
2. Complete the calculation  $37 + 36 = \dots\dots\dots$

You **must** show your workings out.



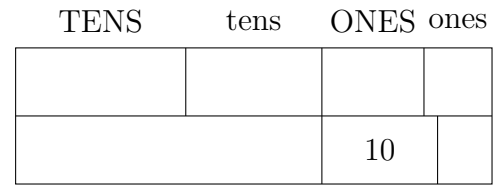
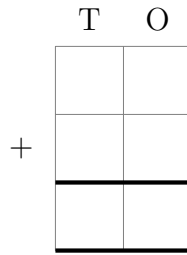
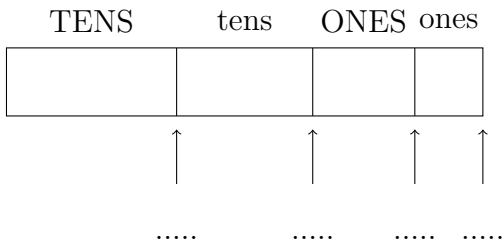
3. Complete the calculation  $29 + 38 = \dots\dots\dots$

You **must** show your workings out.



4. Complete the calculation  $56 + 29 = \dots\dots\dots$

You **must** show your workings out.



## Answers

1. 81
2. 73
3. 67
4. 85