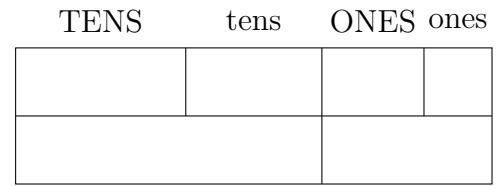
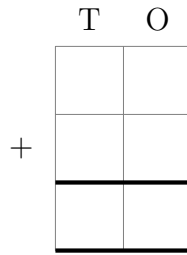
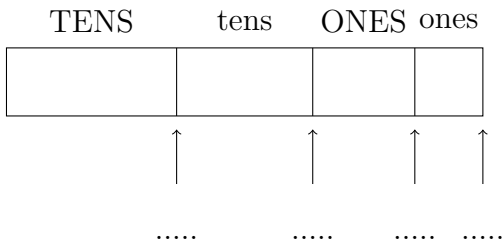


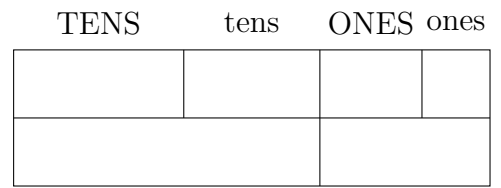
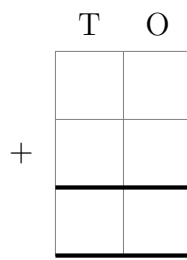
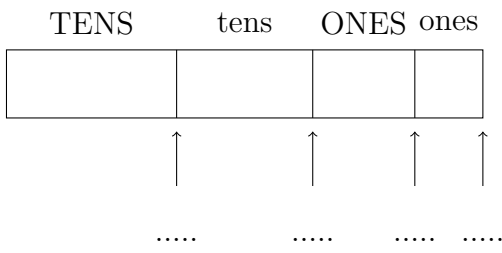
1. Complete the calculation $26 + 42 = \dots\dots\dots$

You **must** show your workings out.



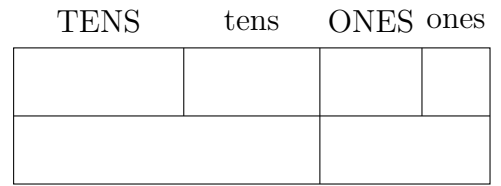
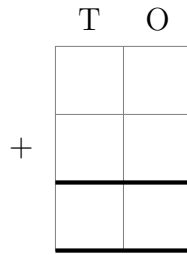
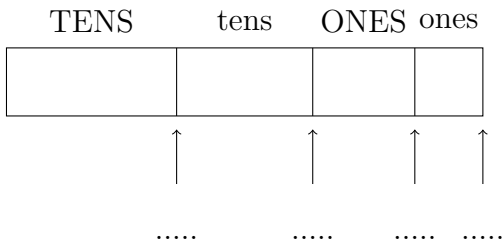
2. Complete the calculation $52 + 41 = \dots\dots\dots$

You **must** show your workings out.



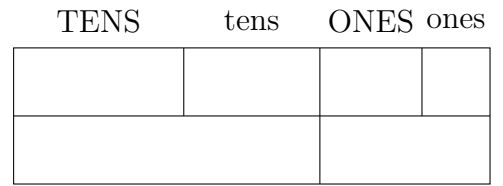
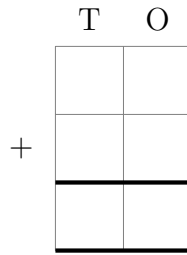
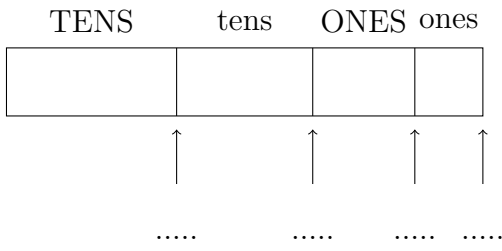
3. Complete the calculation $32 + 25 = \dots\dots\dots$

You **must** show your workings out.



4. Complete the calculation $37 + 61 = \dots\dots\dots$

You **must** show your workings out.



Answers

1. 68
2. 93
3. 57
4. 98