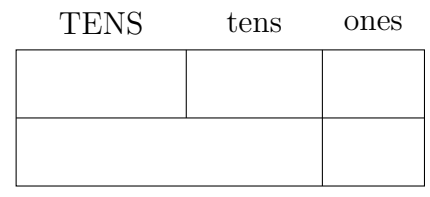
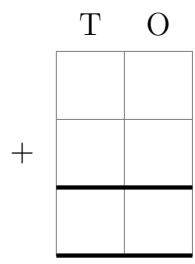
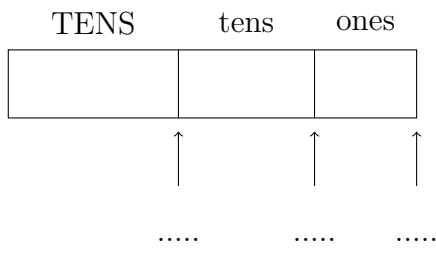


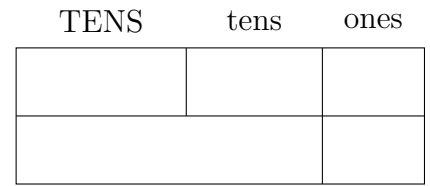
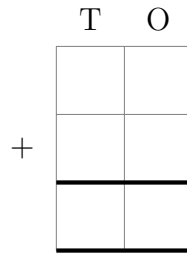
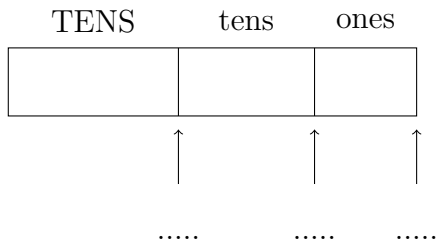
1. Complete the calculation  $56 + 30 = \dots\dots\dots$

You **must** show your workings out.



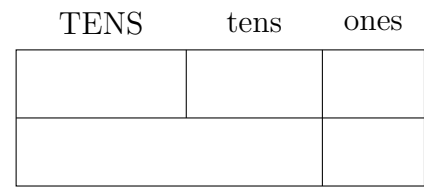
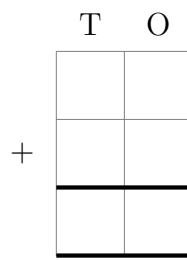
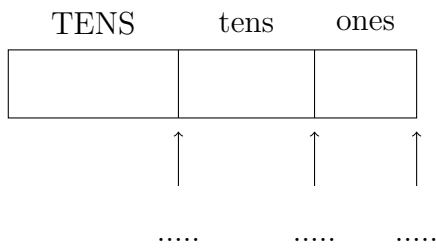
2. Complete the calculation  $61 + 20 = \dots\dots\dots$

You **must** show your workings out.



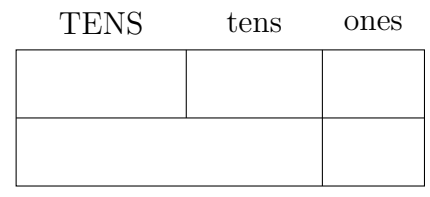
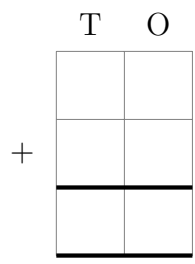
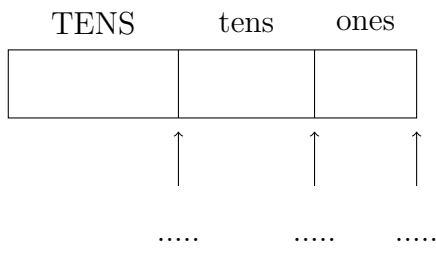
3. Complete the calculation  $30 + 48 = \dots\dots\dots$

You **must** show your workings out.



4. Complete the calculation  $27 + 40 = \dots\dots\dots$

You **must** show your workings out.



## Answers

1. 86
2. 81
3. 78
4. 67