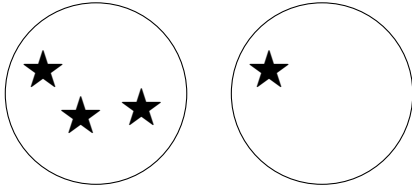
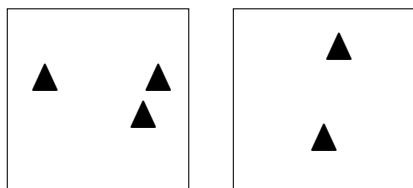


1. Complete the sum



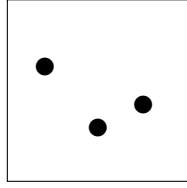

$$3 + 1 = \dots\dots$$

2. Complete the sum




$$3 + 2 = \dots\dots$$

3. Complete the sum



$$7 + 3 = \dots\dots$$

4. Complete the sum



$$2 + 7 = \dots\dots$$

Answers

1. 4

2. 5

3. 10

4. 9