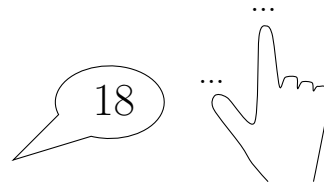




1. Complete the calculation $18 + 2 = \dots$



2. Complete the calculation $17 + 7 = \dots$



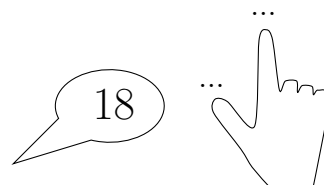
3. Complete the calculation $18 + 5 = \dots$




given + sign (8) answers

Q1: 20 Q2: 24 Q3: 23 Q4: 17 Q5: 21 Q6: 26


1. Complete the calculation $18 + 2 = \dots$




2. Complete the calculation $17 + 7 = \dots$




3. Complete the calculation $18 + 5 = \dots$




4. Complete the calculation $14 + 3 = \dots$




5. Complete the calculation $19 + 2 = \dots$




6. Complete the calculation $19 + 7 = \dots$



4. Complete the calculation $14 + 3 = \dots$



5. Complete the calculation $19 + 2 = \dots$



6. Complete the calculation $19 + 7 = \dots$

