




1. Complete the calculation $86 + 4 = \dots$



2. Complete the calculation $49 + 7 = \dots$




3. Complete the calculation $75 + 5 = \dots$




given + sign (6) answers

Q1: 90 Q2: 56 Q3: 80 Q4: 71 Q5: 84 Q6: 41


1. Complete the calculation $86 + 4 = \dots$




2. Complete the calculation $49 + 7 = \dots$



3. Complete the calculation $75 + 5 = \dots$




4. Complete the calculation $68 + 3 = \dots$




5. Complete the calculation $78 + 6 = \dots$




6. Complete the calculation $36 + 5 = \dots$



4. Complete the calculation $68 + 3 = \dots$



5. Complete the calculation $78 + 6 = \dots$



6. Complete the calculation $36 + 5 = \dots$

