




1. Complete the calculation $26 + 3 = \dots$



2. Complete the calculation $25 + 2 = \dots$




3. Complete the calculation $56 + 3 = \dots$




given + sign (5) answers Q1: 29 Q2: 27 Q3: 59 Q4: 26 Q5: 88 Q6: 38


1. Complete the calculation $26 + 3 = \dots$




2. Complete the calculation $25 + 2 = \dots$




3. Complete the calculation $56 + 3 = \dots$




4. Complete the calculation $25 + 1 = \dots$




5. Complete the calculation $85 + 3 = \dots$




6. Complete the calculation $34 + 4 = \dots$



4. Complete the calculation $25 + 1 = \dots$



5. Complete the calculation $85 + 3 = \dots$



6. Complete the calculation $34 + 4 = \dots$

