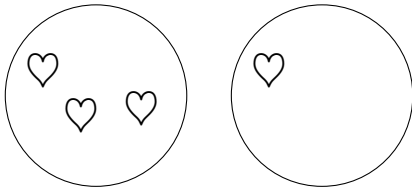
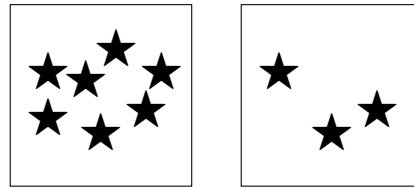


1. Complete the sum



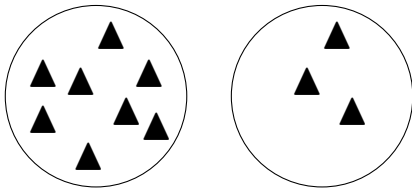
$$3 + 1 = \dots\dots$$

2. Complete the sum



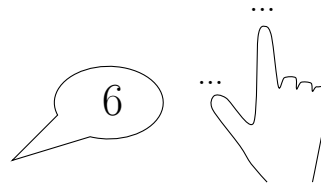
$$7 + 3 = \dots\dots$$

3. Complete this calculation.




$$8 + 3 = \dots\dots$$

4. Complete the calculation $6 + 2 = \dots$



5. Complete the calculation $8 + 5 = \dots$



6. Complete the sum $3 + 2 = \dots\dots$

7. Complete the sum $8 + 6 = \dots\dots$

Answers layer (1) = A1. 4 A2. 10

layer (2) = A3. 11

layer (3) = A4. 8 A5 13

layer (4) = A6. 5 A7. 14