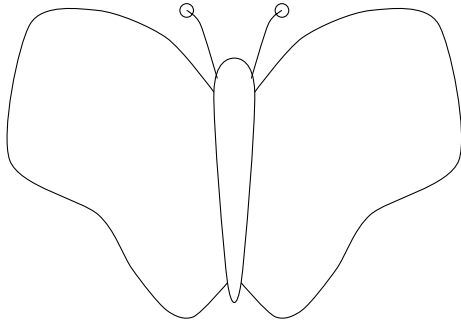
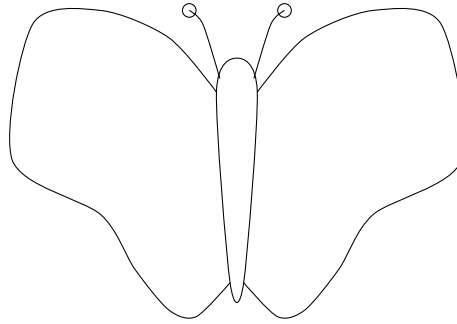


1. Draw half of the number of spots on each side of each butterfly.

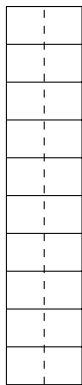


half of 10 =



half of 4 =

2. Draw half the dots on each side of each box.



$\frac{1}{2}$ of 8 =

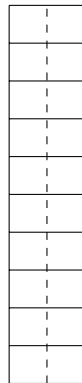


$\frac{1}{2}$ of 2 =

3. Draw half the dots on each side of each box.



$\frac{1}{2}$ of 18 =



$\frac{1}{2}$ of 12 =

4. Complete (i) $\frac{1}{2}$ of 8 =

- (ii) $\frac{1}{2}$ of 16 =

Answers layer (3) = A1. 1st: 5 2nd: 2 A2. 1st: 4 2nd: 1

(4) = A3. 1st: 9 2nd: 6

(5) = A4. (i) 4 (ii) 8