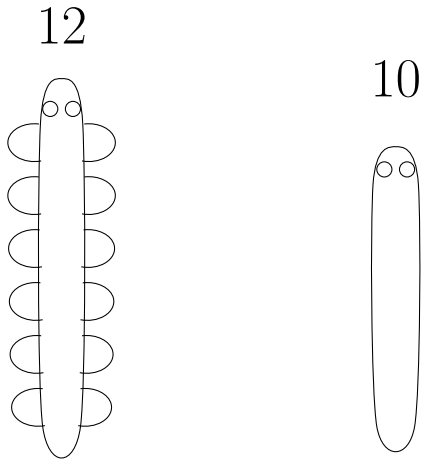


1. Draw half of the number of legs on each side of the caterpillar.

The first diagram is completed for you.

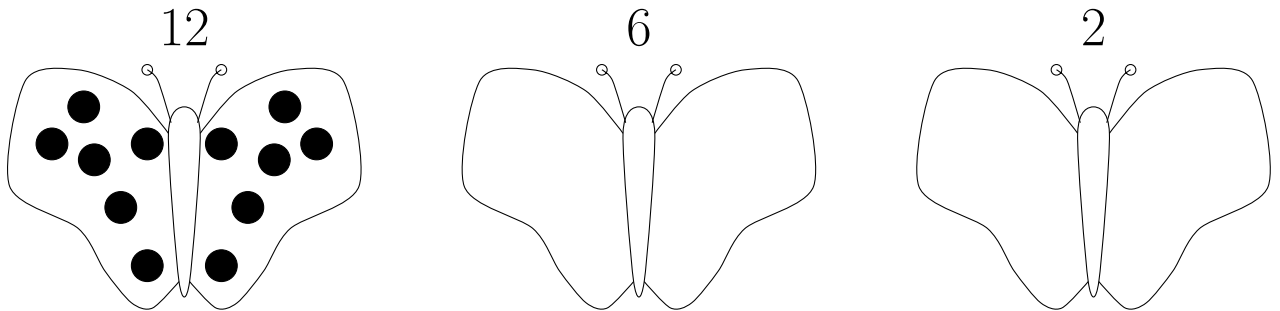


half of 12 =

half of 10 =

2. Draw half of the number of spots on each side of each butterfly.

The first diagram is completed for you.



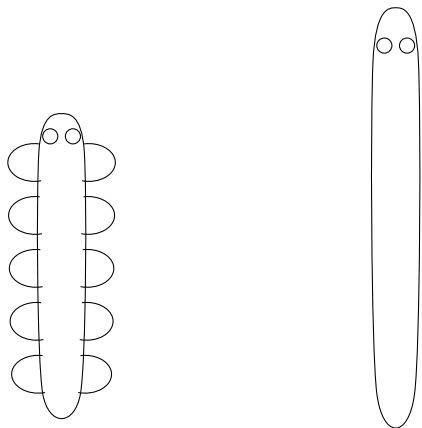
half of 12 =

half of 6 =

half of 2 =

3. Draw half of the number of legs on each side of the caterpillar.

The first diagram is completed for you.



half of 10 =

half of 14 =

Answers layer (1) = A1. 1st: 6 2nd: 5 A2 1st: 6 2nd: 3 3rd: 1
 layer (2) = A3. 1st: 5 2nd: 7