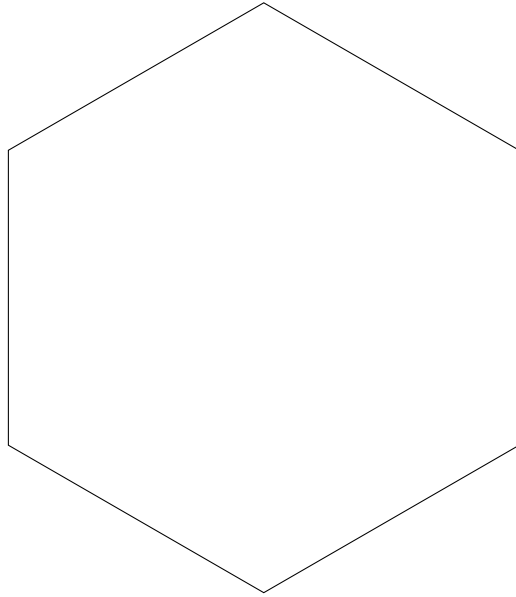


1. Complete this table

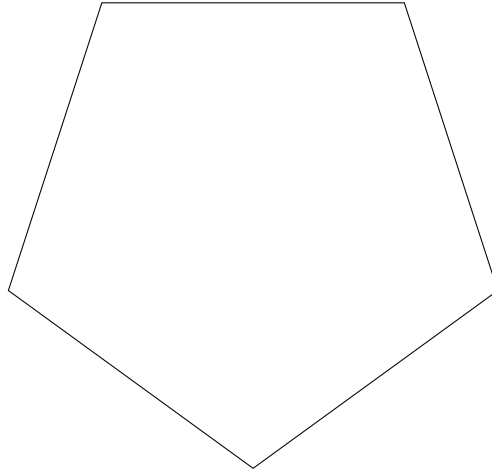
Number of sides	Polygon name
3	triangle
4	quadrilateral
5	.....agon
6	.....agon

2. Write down the name of this shape.



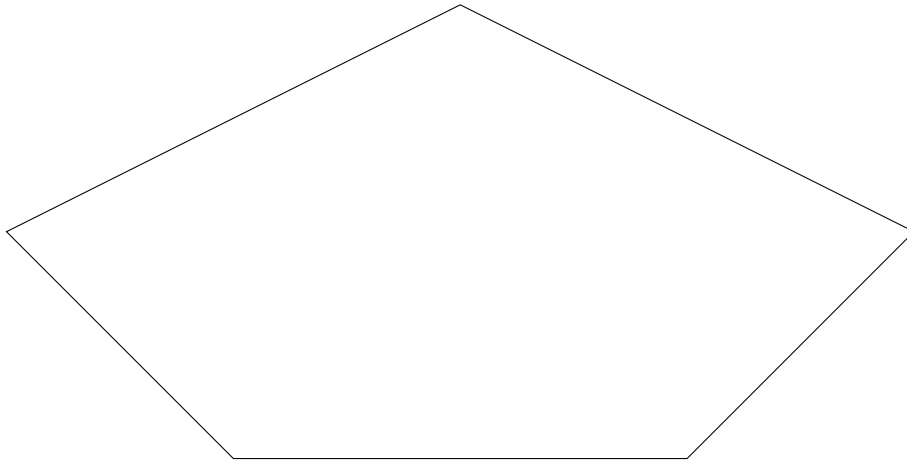
2. ....

3. Write down the name of this shape.



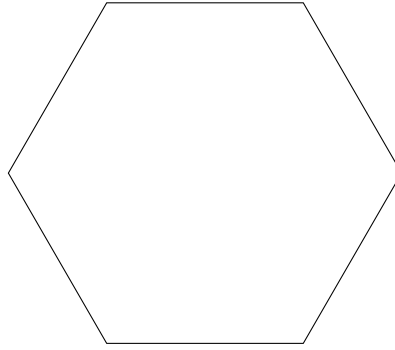
3. ....

4. Write down the name of this shape.



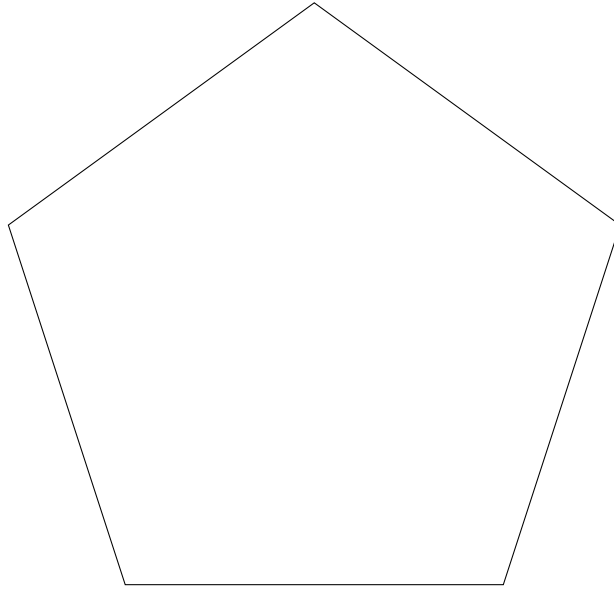
4. ....

5. Write down the name of this shape.



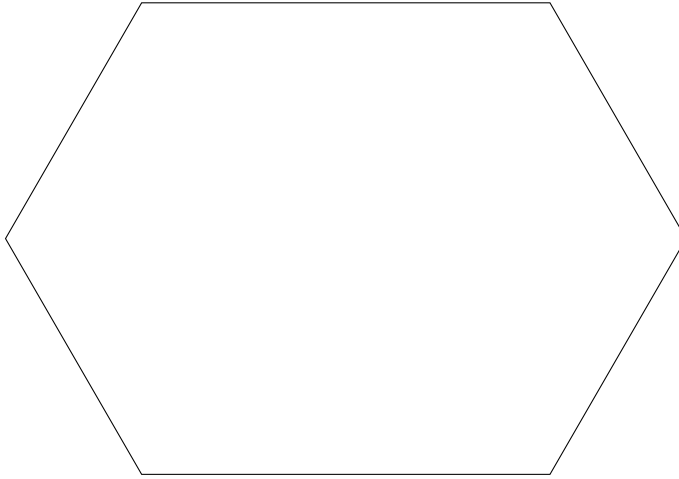
5. ....

6. Write down the name of this shape.



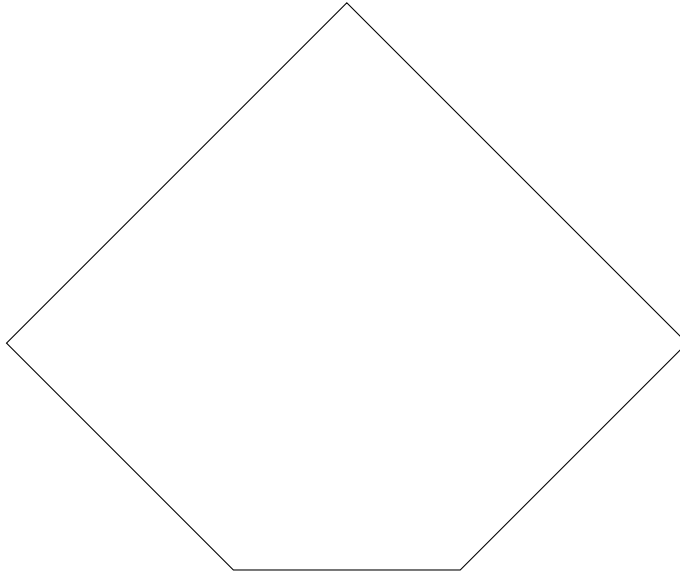
6. ....

7. Write down the name of this shape.



7. ....

8. Write down the name of this shape.



8. ....



## Answers

- |    |                             |
|----|-----------------------------|
| 1. | 1. <b>pentagon, hexagon</b> |
| 2. | 2. <b>..hexagon..</b>       |
| 3. | 3. <b>..pentagon.</b>       |
| 4. | 4. <b>..pentagon.</b>       |
| 5. | 5. <b>..hexagon..</b>       |
| 6. | 6. <b>..pentagon.</b>       |
| 7. | 7. <b>..hexagon..</b>       |
| 8. | 8. <b>..pentagon.</b>       |