



1. Write down the number of squares drawn.



1. ....

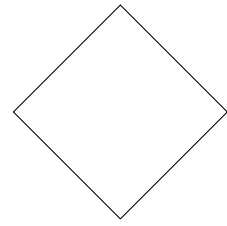
2. Write down the names of these shapes



.....




.....




.....


3. Write down the names of these shapes



.....




.....




.....

4. Write down the name of this shape.




4. ....

5. Write down the name of this shape.




5. ....

6. Write down the name of this shape.




6. ....

7. Write down the name of this shape.



7. ....

8. Write down the name of this shape.



8. ....

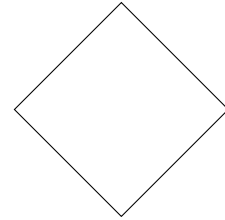



Answers

1.

1. ....**2**.....

2. Write down the names of these shapes






.....

.....

.....

**square, rectangle, square**

3. Write down the names of these shapes



.....

.....

.....

**rectangle, square, rectangle**

4.

4. . **rectangle** .

5.

5. ...**square**...

6.

6. . **rectangle** .

7.

7. . **rectangle** .

8.

8. ...**square**...