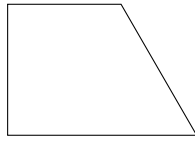


1. Write the number of sides and the shape name beneath each shape.



.... sides

.....

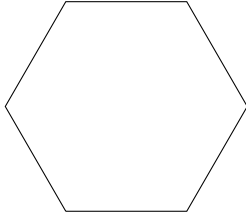


.... sides

.....


| Number of sides | Polygon name |
|-----------------|---------------|
| 3 | triangle |
| 4 | quadrilateral |
| 5 | pentagon |
| 6 | hexagon |

2. Write the number of sides and the shape name beneath each shape.



.... sides

.....




.... sides

.....

| Number of sides | Polygon name |
|-----------------|---------------|
| 3 | triangle |
| 4 | quadrilateral |
| 5 | pentagon |
| 6 | hexagon |

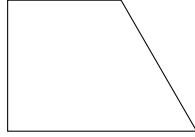
Answers

1. Write the number of sides and the shape name beneath each shape.



.... sides

.....



.... sides

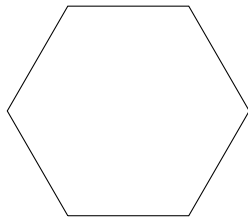
.....

| Number of sides | Polygon name |
|-----------------|---------------|
| 3 | triangle |
| 4 | quadrilateral |
| 5 | pentagon |
| 6 | hexagon |

(i) 6, hexagon (ii) 4, quadrilateral (allow trapezium)

FYI: *don't penalise for missing shape name*

2. Write the number of sides and the shape name beneath each shape.



.... sides

.....



.... sides

.....

| Number of sides | Polygon name |
|-----------------|---------------|
| 3 | triangle |
| 4 | quadrilateral |
| 5 | pentagon |
| 6 | hexagon |

(i) 6, hexagon (ii) 4, quadrilateral (allow rectangle)

FYI: *don't penalise for missing shape name*