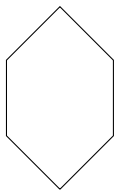
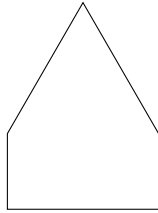


1. Write the number of sides and the shape name beneath each shape.



.... sides

.....

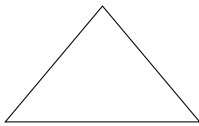


.... sides

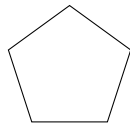
.....

Number of sides	Polygon name
3	triangle
4	quadrilateral
5	.....agon
6	.....agon


2. Tick [✓] the hexagon.




[ ]



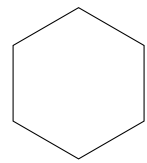
[ ]



[ ]



[ ]

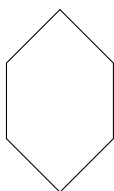


[ ]

2D (5) Q1: (i) 6 hexagon, (ii) 5 pentagon, table: pentagon, hexagon Q2: 5th shape

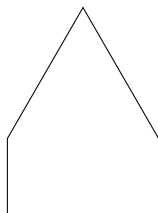
Q3: pentagon, hexagon, pentagon, hexagon, Q4: 3rd shape

1. Write the number of sides and the shape name beneath each shape.



.... sides

.....

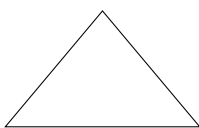


.... sides

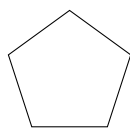
.....

Number of sides	Polygon name
3	triangle
4	quadrilateral
5	.....agon
6	.....agon


2. Tick [✓] the hexagon.




[ ]



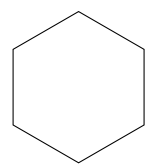
[ ]



[ ]

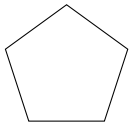


[ ]

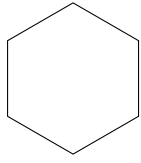


[ ]

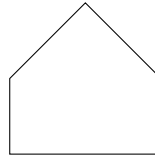
3. Write down the names of these shapes.



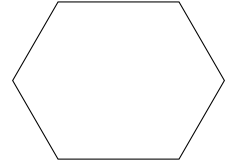
.....



.....

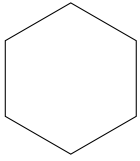


.....

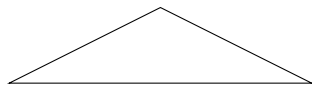


.....

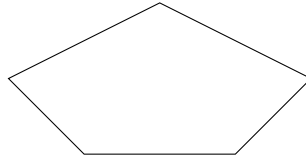
4. Tick  the pentagon.



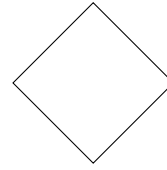
[ ]



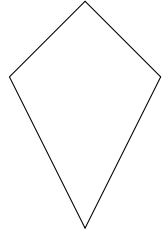
[ ]



[ ]

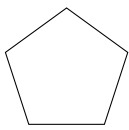


[ ]

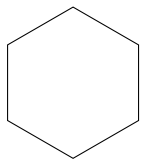


[ ]

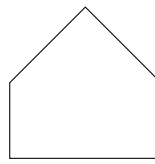
3. Write down the names of these shapes.



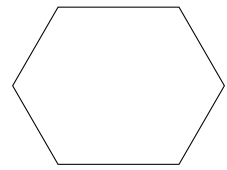
.....



.....

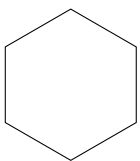


.....

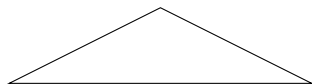


.....

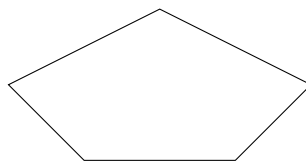
4. Tick  the pentagon.



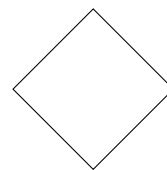
[ ]



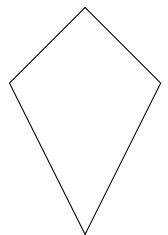
[ ]



[ ]



[ ]



[ ]