
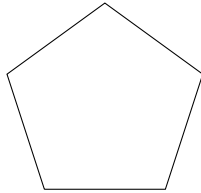


1. Write the number of sides and the shape name beneath each shape.



.... sides

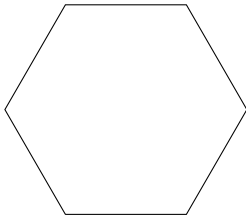
.....



.... sides

.....

Number of sides	Polygon name
3	triangle
4	quadrilateral
5	pentagon
6	hexagon



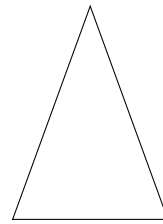
.... sides

.....



.... sides

.....



.... sides


.....

---

2D (1) top: 4, quadrilateral; 5, pentagon bottom: 6, hexagon; 4, quadrilateral; 3 triangle  
 (2) top: 4, quadrilateral; 4, quadrilateral bottom: 3, triangle; 5, pentagon; 6 hexagon

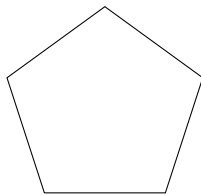
---

1. Write the number of sides and the shape name beneath each shape.



.... sides

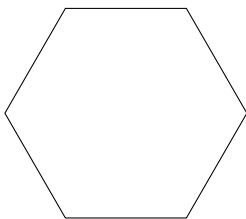
.....



.... sides

.....

Number of sides	Polygon name
3	triangle
4	quadrilateral
5	pentagon
6	hexagon



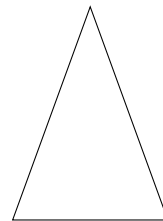
.... sides

.....



.... sides


.....



.... sides

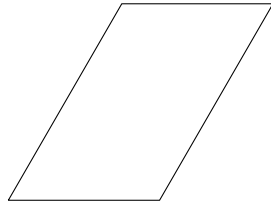
.....

2. Write the number of sides and the shape name beneath each shape.



.... sides

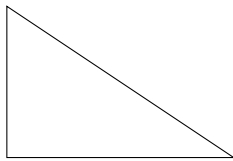
.....



.... sides

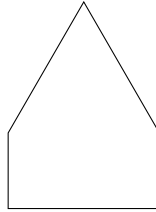
.....

Number of sides	Polygon name
3	triangle
4	quadrilateral
5	pentagon
6	hexagon



.... sides

.....



.... sides


.....



.... sides

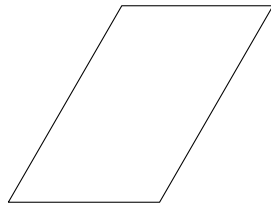
.....

2. Write the number of sides and the shape name beneath each shape.



.... sides

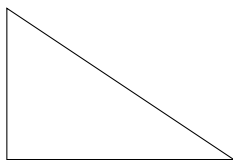
.....



.... sides

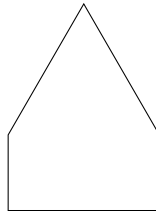
.....

Number of sides	Polygon name
3	triangle
4	quadrilateral
5	pentagon
6	hexagon



.... sides

.....



.... sides

.....



.... sides

.....