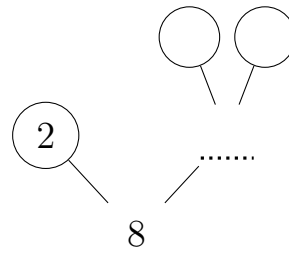
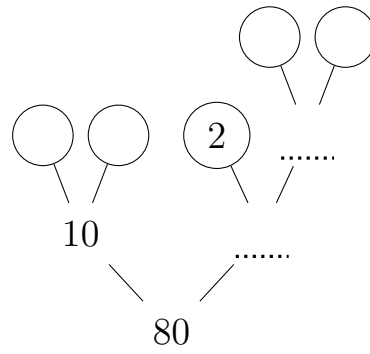


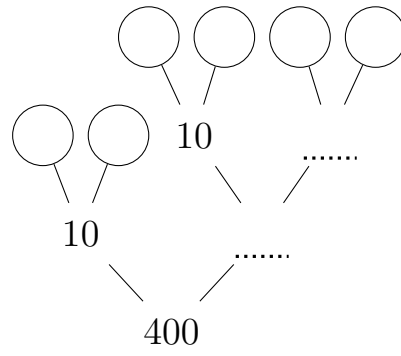
1. Complete this prime factor tree.



2. Complete this prime factor tree.



3. Complete this prime factor tree.



Answers

1. leaves: 2, 2, 2
2. leaves: 2, 5, 2, 2, 2
3. leaves: 2, 5, 2, 5, 2, 2