


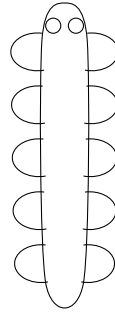
1. The maths teacher says there are two other ways to write half: $\frac{1}{2}$ and $\div 2$

Complete these examples.



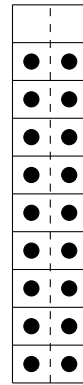
$\frac{1}{2}$ of 12 =

$12 \div 2 = \dots$



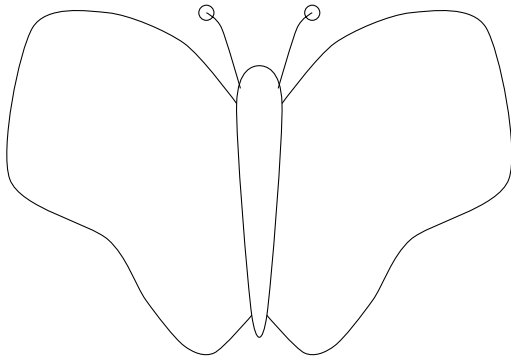
$\frac{1}{2}$ of 10 =

$10 \div 2 = \dots$



$\frac{1}{2}$ of 18 =

$18 \div 2 = \dots$



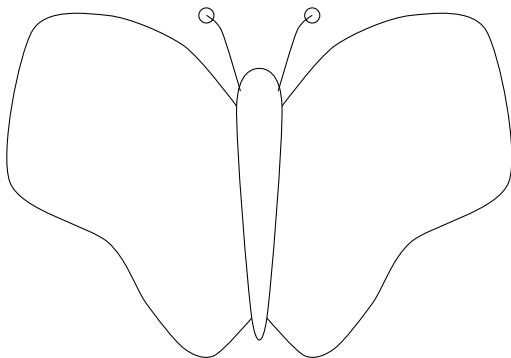
$14 \div 2 = \dots$



$8 \div 2 = \dots$



$16 \div 2 = \dots$



$18 \div 2 = \dots$



$6 \div 2 = \dots$



$12 \div 2 = \dots$

Answers layer 1 top row: 6, 5, 9; middle row 7, 4, 8; bottom row 9, 3, 6