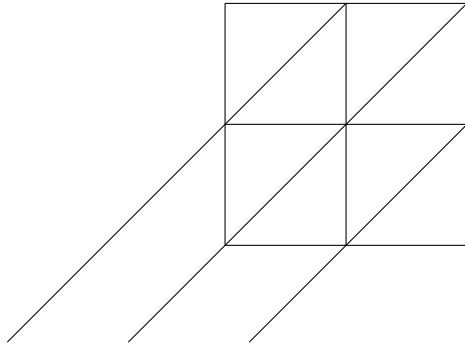


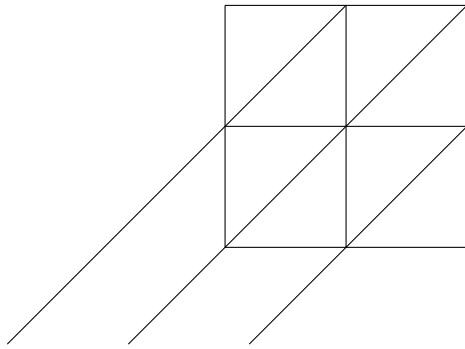
1. Use the Gelosia grid to work out 68×47



$68 \times 47 = \dots\dots\dots$

×	02	03	04	05	06	07	08	09
02								
03		09	12		18	21	24	
04		12	16		24	28	32	
05								
06		18	24		36	42	48	
07		21	28		42	49	56	
08		24	32		48	56	64	
09								

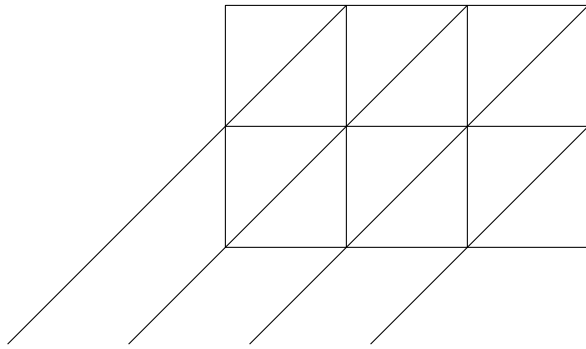
2. Use the Gelosia grid to work out 47×72



$47 \times 72 = \dots\dots\dots$

×	02	03	04	05	06	07	08	09
02								
03		09	12		18	21	24	
04		12	16		24	28	32	
05								
06		18	24		36	42	48	
07		21	28		42	49	56	
08		24	32		48	56	64	
09								

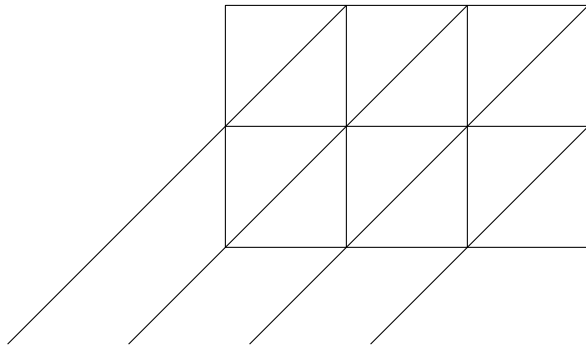
3. Use the Gelosia grid to work out 417×86



$417 \times 86 = \dots\dots\dots$

×	02	03	04	05	06	07	08	09
02								
03		09	12		18	21	24	
04		12	16		24	28	32	
05								
06		18	24		36	42	48	
07		21	28		42	49	56	
08		24	32		48	56	64	
09								

4. Use the Gelosia grid to work out 814×27



$814 \times 27 = \dots\dots\dots$

×	02	03	04	05	06	07	08	09
02								
03		09	12		18	21	24	
04		12	16		24	28	32	
05								
06		18	24		36	42	48	
07		21	28		42	49	56	
08		24	32		48	56	64	
09								

Answers

1. 3 196

2. 3 384

3. 35 862

4. 21 978