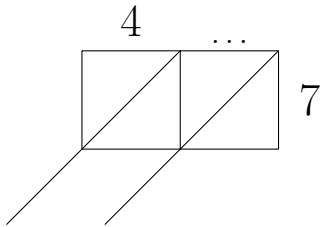


1. Work out 48×7

You may use the 7's row of the times table grid:

\times	2	3	4	5	6	7	8	9
7	14	21	28	35	42	49	56	63

You **must** show your workings out.



4	0	\times	7	=			
	...	\times	7	=			
4	8	\times	7	=			

\leftarrow *hint* $4 \times 7 = \dots$

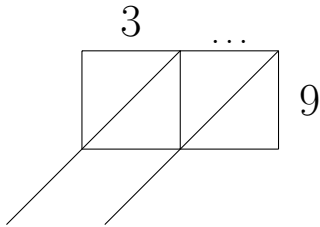
1.

2. Work out 39×9

You may use the 9's row of the times table grid:

×	2	3	4	5	6	7	8	9
9	18	27	36	45	54	63	72	81

You **must** show your workings out.



3	0	×	9	=			
	...	×	9	=			
3	9	×	9	=			

← *hint* $3 \times 9 = \dots$

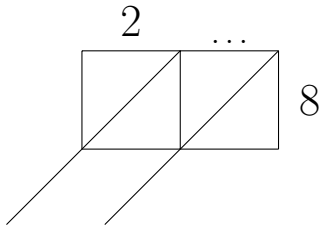
2.

3. Work out 26×8

You may use the 8's row of the times table grid:

\times	2	3	4	5	6	7	8	9
8	16	24	32	40	48	56	64	72

You **must** show your workings out.



2	0	\times	8	=			
	...	\times	8	=			
2	6	\times	8	=			

\leftarrow *hint* $2 \times 8 = \dots$

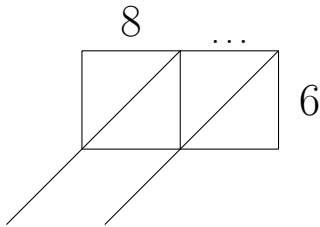
3.

4. Work out 88×6

You may use the 6's row of the times table grid:

\times	2	3	4	5	6	7	8	9
6	12	18	24	30	36	42	48	54

You **must** show your workings out.



8	0	\times	6	=			
	...	\times	6	=			
8	8	\times	6	=			

\leftarrow *hint* $8 \times 6 = \dots$

4.

Answers

1. 336
2. 351
3. 208
4. 528