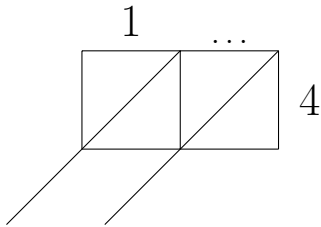


1. Work out 15×4

You may use the 4's row of the times table grid:

\times	2	3	4	5	6	7	8	9
4	8	12	16	20	24	28	32	36

You **must** show your workings out.



1	0	\times	4	=		
	...	\times	4	=		
1	5	\times	4	=		

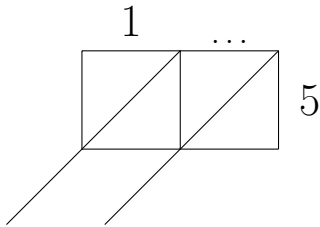
1.

2. Work out 17×5

You may use the 5's row of the times table grid:

\times	2	3	4	5	6	7	8	9
5	10	15	20	25	30	35	40	45

You **must** show your workings out.



1	0	\times	5	=		
	...	\times	5	=		
1	7	\times	5	=		

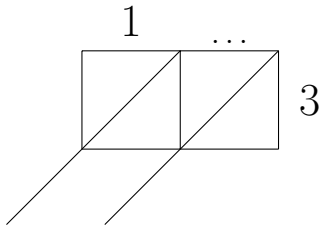
2.

3. Work out 13×3

You may use the 3's row of the times table grid:

\times	2	3	4	5	6	7	8	9
3	6	9	12	15	18	21	24	27

You **must** show your workings out.



1	0	\times	3	=		
	...	\times	3	=		
1	3	\times	3	=		

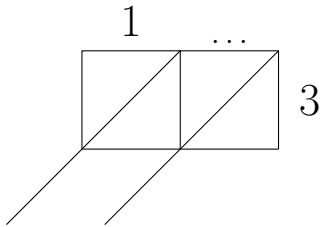
3.

4. Work out 19×3

You may use the 3's row of the times table grid:

\times	2	3	4	5	6	7	8	9
3	6	9	12	15	18	21	24	27

You **must** show your workings out.



1	0	\times	3	=		
	...	\times	3	=		
1	9	\times	3	=		

4.

Answers

1. 60
2. 85
3. 39
4. 57