



1. Complete the calculation



$$3 \times 4 = \dots\dots$$

2. Complete the calculation




$$4 \times 5 = \dots\dots$$

3. Complete the calculation



$$1 \times 4 = \dots\dots$$

4. Complete the calculation



$$2 \times 8 = \dots\dots$$

5. Complete the calculation



$$1 \times 7 = \dots\dots$$

## Answers

1. 12

2. 20

3. 4

4. 16

5. 7