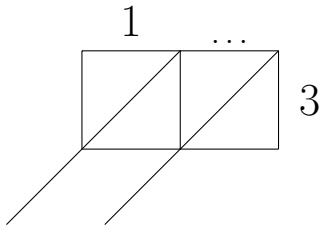


1. Work out 15×3

You may use the 3's row of the times table grid:

\times	2	3	4	5	6	7	8	9
3	6	9	12	15	18	21	24	27

You **must** show your workings out.



1	0	\times	3	=		
	...	\times	3	=		
1	5	\times	3	=		

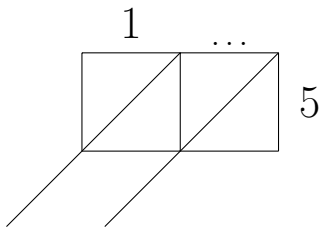
1.

2. Work out 13×5

You may use the 5's row of the times table grid:

\times	2	3	4	5	6	7	8	9
5	10	15	20	25	30	35	40	45

You **must** show your workings out.



1	0	\times	5	=		
	...	\times	5	=		
1	3	\times	5	=		

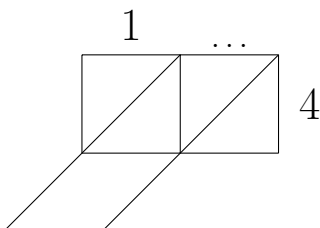
2.

3. Work out 14×4

You may use the 4's row of the times table grid:

\times	2	3	4	5	6	7	8	9
4	8	12	16	20	24	28	32	36

You **must** show your workings out.



1	0	\times	4	=		
	...	\times	4	=		
1	4	\times	4	=		

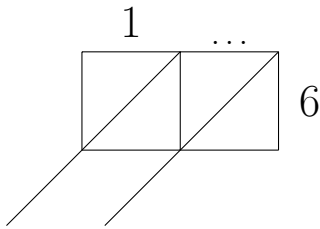
3.

4. Work out 13×6

You may use the 6's row of the times table grid:

\times	2	3	4	5	6	7	8	9
6	12	18	24	30	36	42	48	54

You **must** show your workings out.



1	0	\times	6	=		
	...	\times	6	=		
1	3	\times	6	=		

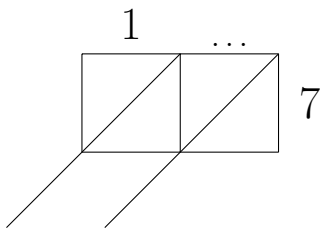
4.

5. Work out 14×7

You may use the 7's row of the times table grid:

\times	2	3	4	5	6	7	8	9
7	14	21	28	35	42	49	56	63

You **must** show your workings out.



1	0	\times	7	=		
	...	\times	7	=		
1	4	\times	7	=		

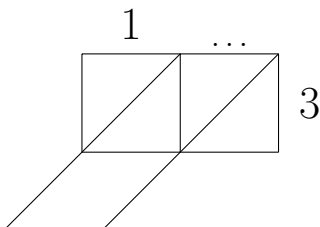
5.

6. Work out 18×3

You may use the 3's row of the times table grid:

\times	2	3	4	5	6	7	8	9
3	6	9	12	15	18	21	24	27

You **must** show your workings out.



1	0	\times	3	=		
	...	\times	3	=		
1	8	\times	3	=		

6.

answers Q1: 45, Q2: 65, Q3: 56, Q4: 78, Q5: 98, Q6: 54