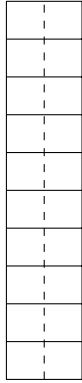
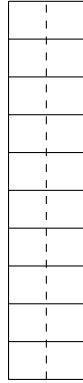


1. Draw half the dots on each side of each box.

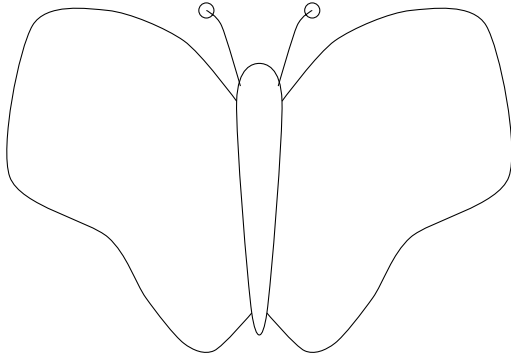


$$\frac{1}{2} \text{ of } 4 = \dots$$

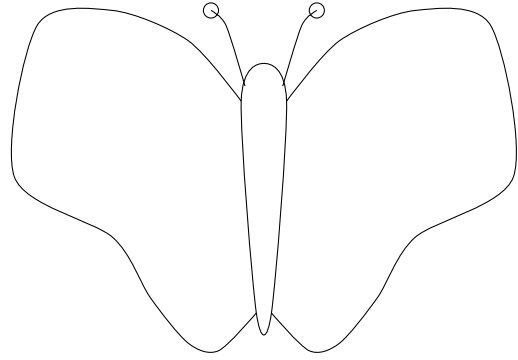


$$\frac{1}{2} \text{ of } 10 = \dots$$

2. Draw half of the number of spots on each side of each butterfly.

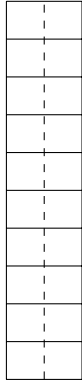


half of 10 =

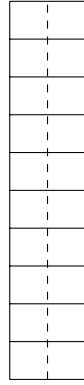


half of 6 =

3. Draw half the dots on each side of each box.

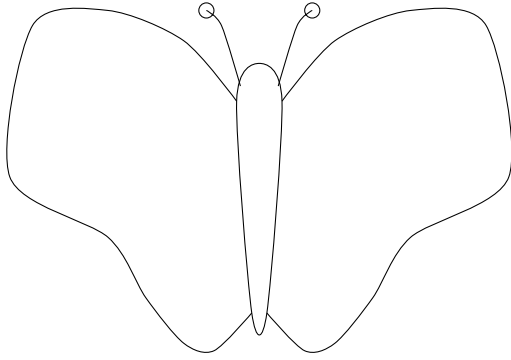


$$\frac{1}{2} \text{ of } 8 = \dots$$

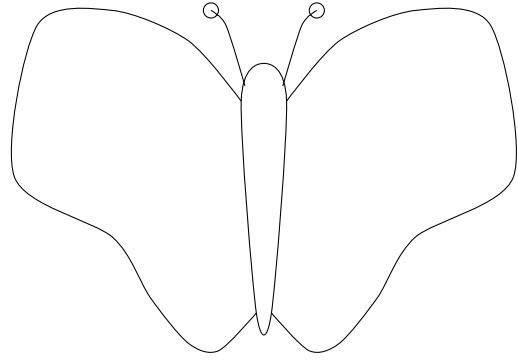


$$\frac{1}{2} \text{ of } 2 = \dots$$

4. Draw half of the number of spots on each side of each butterfly.



half of 10 =



half of 4 =

Answers

1. 1st: 2 2nd: 5
2. 1st: 5 2nd: 3
3. 1st: 4 2nd: 1
4. 1st: 5 2nd: 2