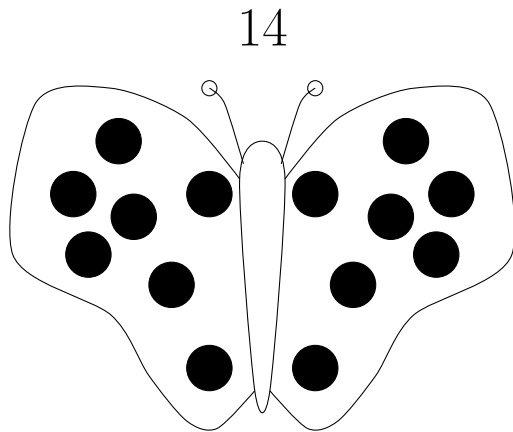
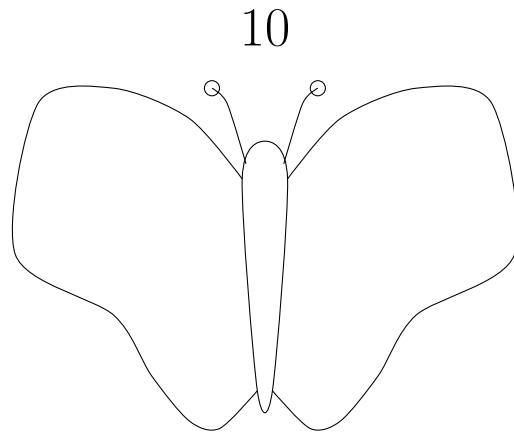


1. Draw half of the number of spots on each side of the butterfly.

The first diagram is completed for you.



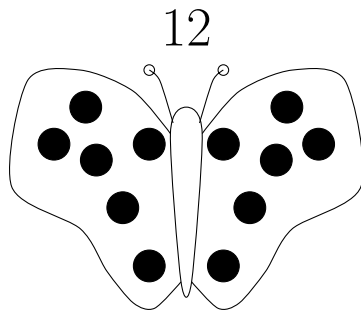
half of 14 =



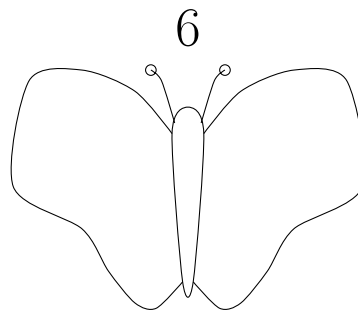
half of 10 =

2. Draw half of the number of spots on each side of each butterfly.

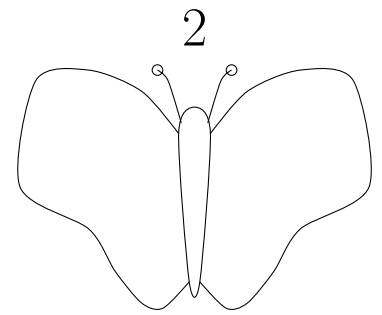
The first diagram is completed for you.



half of 12 =



half of 6 =

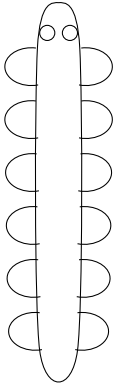


half of 2 =

3. Draw half of the number of legs on each side of the caterpillar.

The first diagram is completed for you.

12



half of 12 =

10



half of 10 =

8



half of 8 =

Answers

1. 1st: 7 2nd: 5
2. 1st: 6 2nd: 3 3rd: 1
3. 1st: 6 2nd: 5 3rd: 4