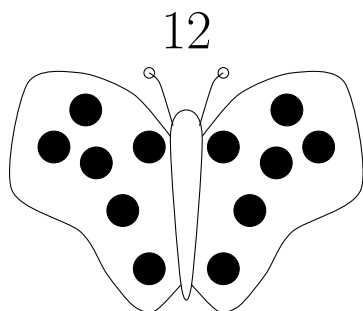
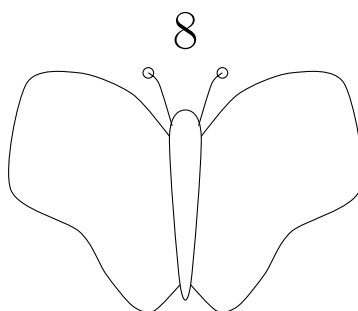


1. Draw half of the number of spots on each side of each butterfly or half the legs on each side of the caterpillar.

The first diagram is completed for you.



half of 12 =



half of 8 =

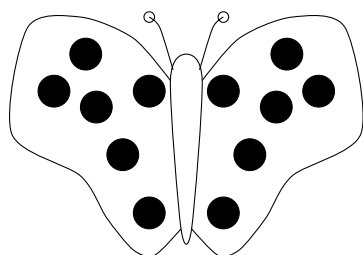
6



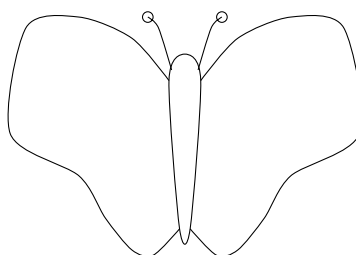
half of 6 =

2. Draw half of the number of spots on each side of the butterfly or box.

The first diagram is completed for you.



half of 12 =



half of 16 =



$\frac{1}{2}$ of 14 =

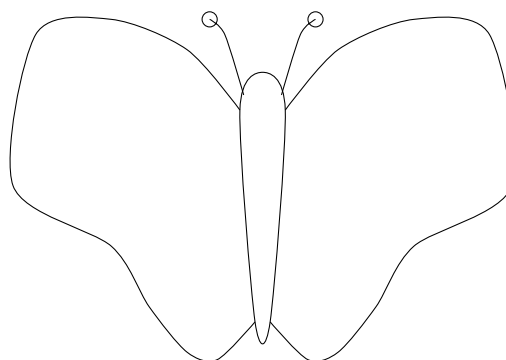
3. Draw half the dots on each side of each box or butterfly.



$\frac{1}{2}$ of 6 =



$\frac{1}{2}$ of 10 =



half of 8 =

4. Complete

(i) $\frac{1}{2}$ of 10 =

(ii) $\frac{1}{2}$ of 2 =

(ii) $\frac{1}{2}$ of 6 =

5. Complete these calculations

(i) $\frac{1}{2}$ of 8 = (ii) $\frac{1}{2}$ of 4 =

(iii) $\frac{1}{2}$ of 80 = (iv) $\frac{1}{2}$ of 40 =

6. Complete (i) $\frac{1}{2}$ of 60 =

(ii) $\frac{1}{2}$ of 80 =

7. Write down $\frac{1}{2}$ of 42

You may complete these calculations if you like $\frac{1}{2}$ of 40 = $\frac{1}{2}$ of 2 = ...

8. Work out $\frac{1}{2}$ of 68

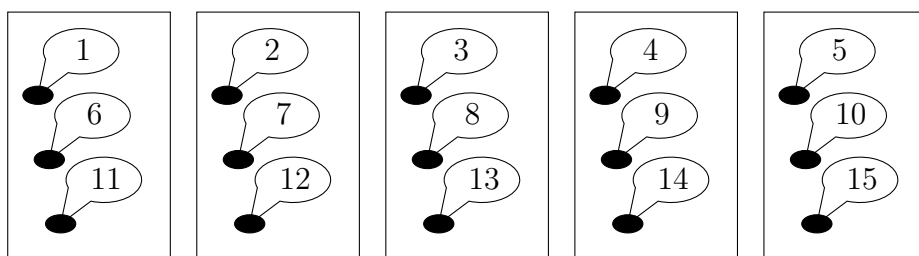
9.

9. not written yet


10. The teacher says you can work out $\frac{1}{5}$ of 15 by fairly sharing out 15 counters into 5 boxes.

Complete these calculations

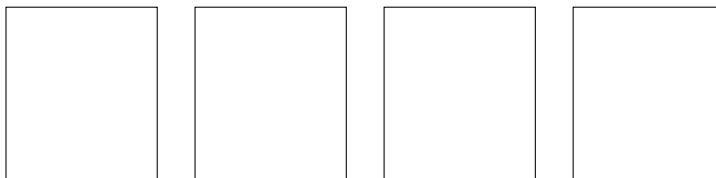
(a) $\frac{1}{5}$ of 15 =



(b) $\frac{1}{3}$ of 27 =



(c) $\frac{1}{4}$ of 24 =



11. Work out $\frac{1}{9}$ of 54 {ONLY unit fraction}

12. Write down $\frac{1}{2}$ of 16

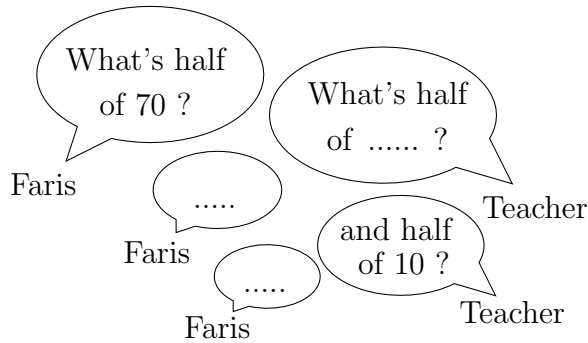
13. (a) Write down half of 90.

You may complete this box, if it helps you.

half of	=
+ half of	10	=
half of	90	=

(b) Help Faris work out half of 70.

You can imagine what a teacher might say if it helps you.



(c) (i) Write down half of 100

You may complete this box, if it helps you.

half of	10	=
half of	100	=

(ii) Write down half of 50

You may complete this box, if it helps you.

half of	=
+ half of	10	=
half of	50	=

14. Work out $\frac{1}{2}$ of 76

15.

15. not written yet

16. Work out $\frac{7}{9}$ of 36 {NEVER unit fraction}

17. (a) Work out the value of 0.5×68

(b) Work out the value of $\frac{30}{2}$