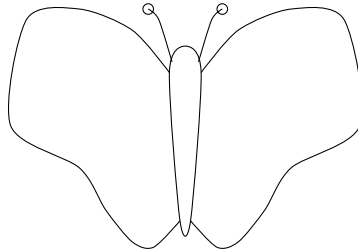
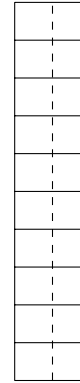


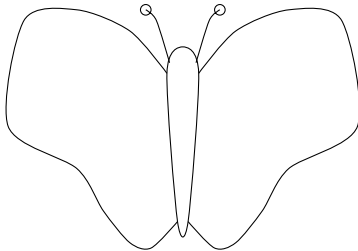
1. Draw half the dots on each side of each box or butterfly.



half of 8 =



$\frac{1}{2}$ of 12 =

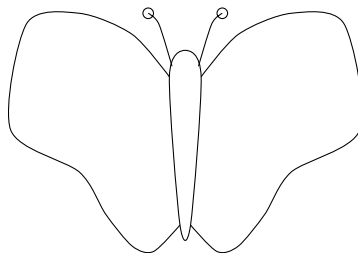


$\frac{1}{2}$ of 6 =

$\frac{1}{2}$ of 10 =

fractionOF (3) answers Q1 top row: 6, 4, 5, bottom row 3, Q2 top row: 6, 2, 4, bottom row: 5, 1

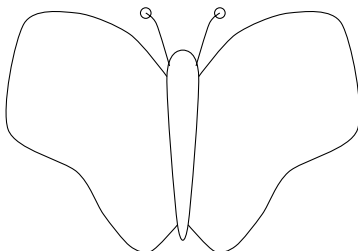
1. Draw half the dots on each side of each box or butterfly.



half of 8 =



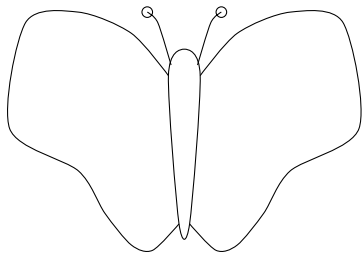
$\frac{1}{2}$ of 12 =



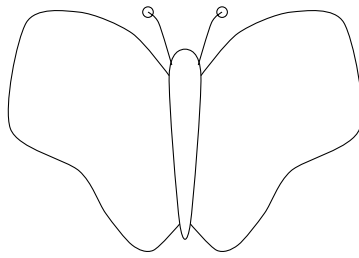
$\frac{1}{2}$ of 6 =

$\frac{1}{2}$ of 10 =

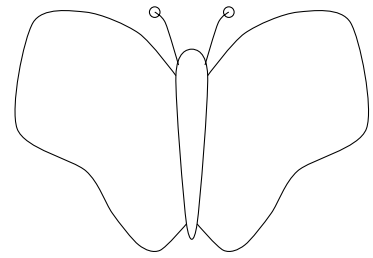
2. Draw half of the number of spots on each side of each butterfly.



half of 12 =

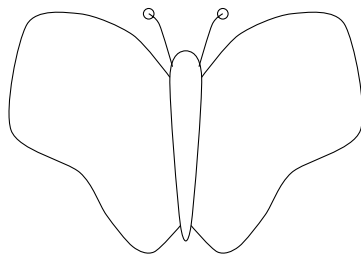


half of 4 =

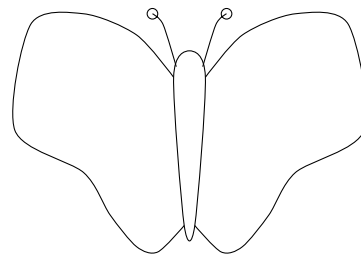


half of 8 =

3. Draw half of the number of spots on each side of each butterfly.

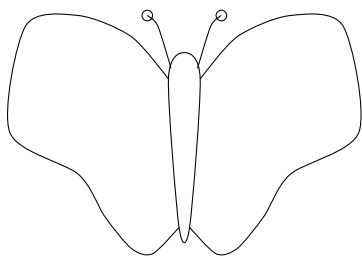


$\frac{1}{2}$ of 10 =

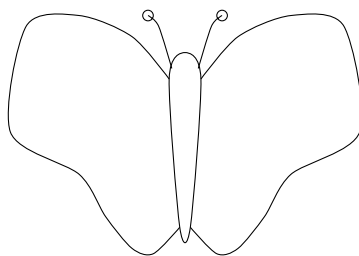


$\frac{1}{2}$ of 2 =

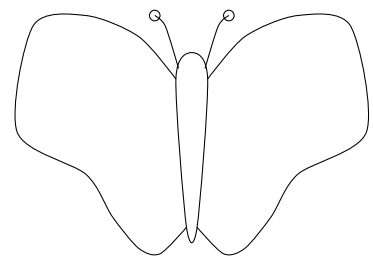
2. Draw half of the number of spots on each side of each butterfly.



half of 12 =

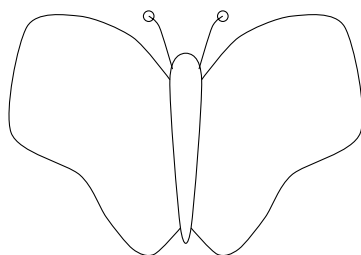


half of 4 =

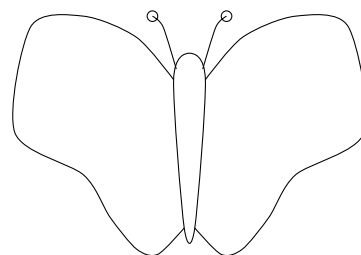


half of 8 =

3. Draw half of the number of spots on each side of each butterfly.



$\frac{1}{2}$ of 10 =



$\frac{1}{2}$ of 2 =