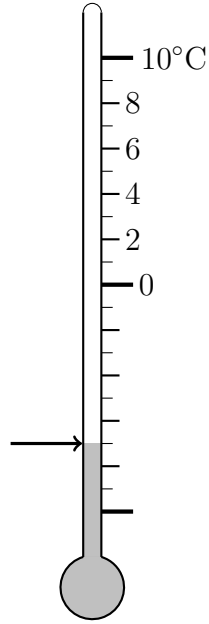


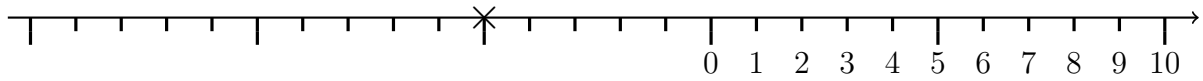
1. An arrow points to a temperature on this thermometer.



Write down the temperature the arrow points to.

..... ° C

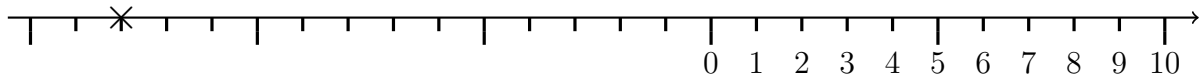
2. A number is shown with a cross ( $\times$ ) on this number line.



Write down the number marked with the cross.

2. ....

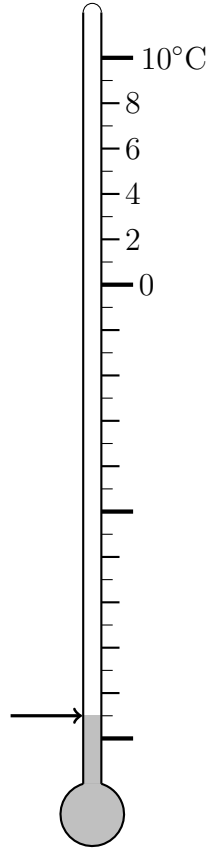
3. A number is shown with a cross ( $\times$ ) on this number line.



Write down the number marked with the cross.

3. ....

4. An arrow points to a temperature on this thermometer.



Write down the temperature the arrow points to.

..... ° C

## Answers

1.  $-7^{\circ}\text{C}$ 2.  $-5$ 3.  $-13$ 4.  $-19^{\circ}\text{C}$