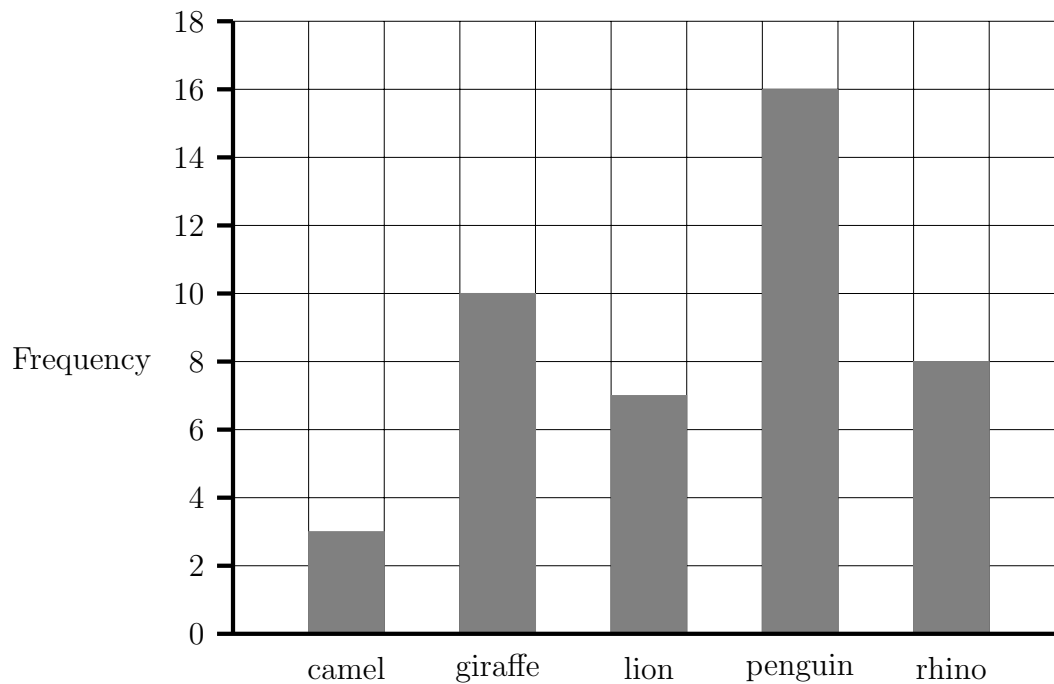


1. The bar chart gives information about which type of animal some competition winners look after when they are zoo keepers for a day.



- (a) Which animal do 8 of the competition winners look after?

(a) .....

- (b) What fraction of the competition winners look after the giraffes?

(b) .....

2. This table shows the sandwich filling chosen by some people at a “working lunch”.

Sandwich filling	Frequency
Avocado	5
Chicken	7
Cheese	11
Ham	13
Salad	6
Tuna	9

- (a) How many more people choose cheese than salad?

(a) .....

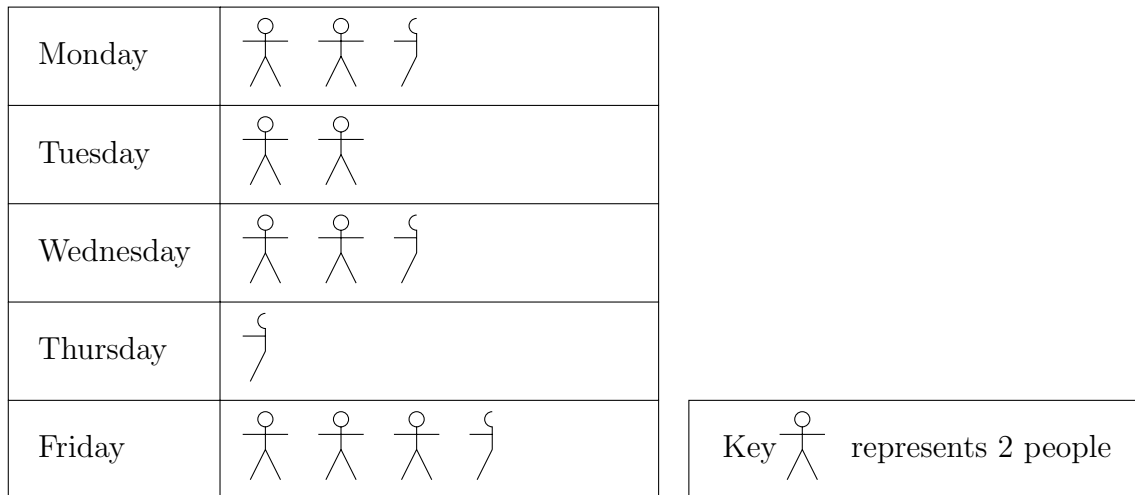
- (b) What fraction of these people choose ham?

(b) .....

Turn over for more questions and answers

3. Here is a pictogram.

It shows the number of customers in a coffee shop at 4 p.m. last week.



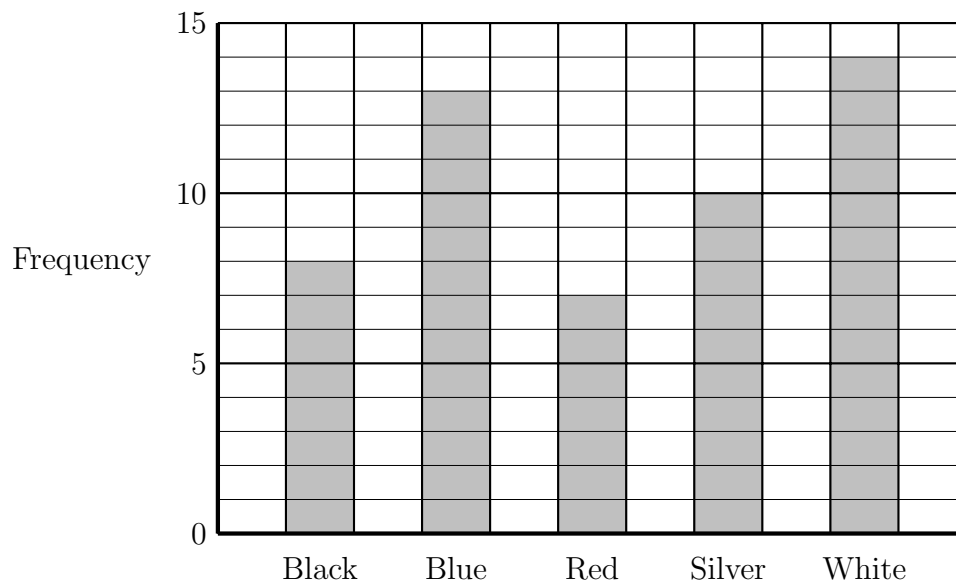
(a) Which day are 7 people in the coffee shop at 4 p.m.?

(a) .....

(b) How many customers altogether were in the coffee shop at 4 p.m. from Monday to Friday last week?

(b) .....

4. The bar chart gives information about the colour of cars parked in a street.



(a) How many less black cars than white cars were parked in the street?

(a) .....

(b) What fraction of the cars were red?

(b) .....

Answers 1a) rhino    1b)  $\frac{10}{44}$     2a) 5    2b)  $\frac{13}{51}$     3a) Friday    3b) 22    4a) 6    4b)  $\frac{7}{52}$