

1. Here is a square.

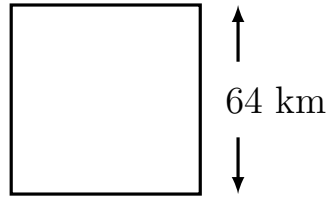


Diagram NOT
accurately drawn

Work out the perimeter of the square.

..... km

2. Here is a square with a side length of 9 mm.

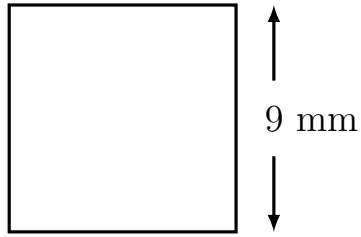


Diagram NOT
accurately drawn

Work out the perimeter of the square.

..... mm

3. Here is a square with a side length of 36 km.


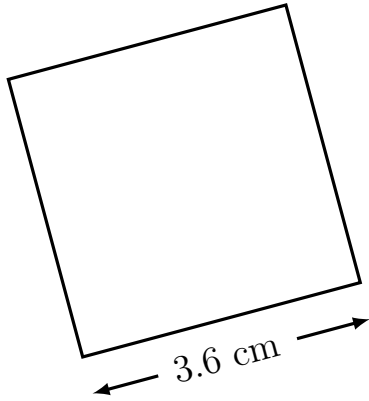


Diagram NOT
accurately drawn

Work out the perimeter of the square.

..... km

4. Here is a square with a side of 3.6 centimetres.



Work out the perimeter of the square.

..... cm

5. The length of one side of a square is 81 mm.

Work out the perimeter of the square.

..... mm

Answers

1. 256 km
2. 36 mm
3. 144 km
4. 14.4 cm
5. 324 mm