


1. Here is a rectangle.



2 cm

Diagram NOT accurately drawn

10 cm

Work out the perimeter of the rectangle.

..... cm

2. Here is a rectangle.



4 cm

Diagram NOT accurately drawn

9 cm

Work out the perimeter of the rectangle.


..... cm

---

perimeter (4) Answers 1) 24   2) 26   3) 16   4) 20

---

1. Here is a rectangle.



2 cm


Diagram NOT accurately drawn

10 cm

Work out the perimeter of the rectangle.

..... cm

2. Here is a rectangle.



4 cm

Diagram NOT accurately drawn

9 cm

Work out the perimeter of the rectangle.

..... cm

3. Here is a rectangle.



1 cm

Diagram NOT accurately drawn

7 cm

Work out the perimeter of the rectangle.

..... cm

4. Here is a rectangle.



2 cm

Diagram NOT accurately drawn

8 cm

Work out the perimeter of the rectangle.

..... cm

3. Here is a rectangle.



1 cm


Diagram NOT accurately drawn

7 cm

Work out the perimeter of the rectangle.

..... cm

4. Here is a rectangle.



2 cm

Diagram NOT accurately drawn

8 cm

Work out the perimeter of the rectangle.

..... cm