

1. Here is a square.




Diagram NOT accurately drawn

Work out the perimeter of the square.

..... mm

2. In the diagram  $FG = 8$  km

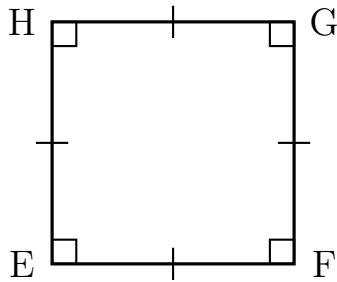


Diagram NOT accurately drawn

Work out the perimeter of EFGH.

..... km

perimeter (8) Answers 1) 136   2) 32   3) 200   4) 24.4

1. Here is a square.




Diagram NOT accurately drawn

Work out the perimeter of the square.

..... mm

2. In the diagram  $FG = 8$  km

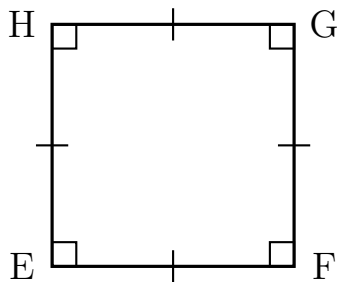


Diagram NOT accurately drawn

Work out the perimeter of EFGH.

..... km

- 3. A square has side length 50 cm  
Work out the perimeter of the square.

..... cm

- 4. Here is a square.

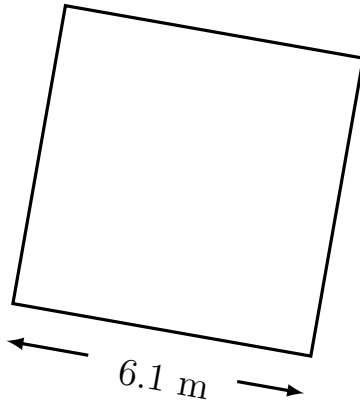


Diagram NOT accurately drawn

Work out the perimeter of the square.

..... m

- 3. A square has side length 50 cm  
Work out the perimeter of the square.

..... cm

- 4. Here is a square.

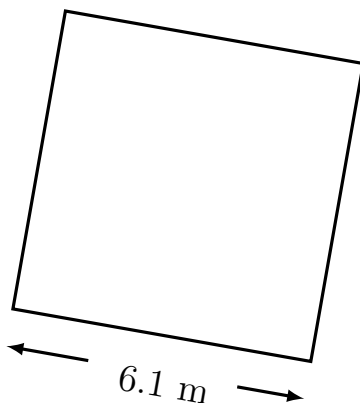


Diagram NOT accurately drawn

Work out the perimeter of the square.

..... m