

1. Complete the requested information for these two arithmetic sequences.

(a) 3 7 11 15 ...

(i) term to term rule is

<p>Scaffold</p>	5 6 7	4	5	6	7
		11
		15
	

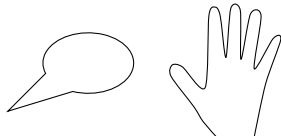
(ii) complete the 5th term

(b) 4 6 8 10 ...

(i) term to term rule is

Scaffold

(ii) complete the 5th term



seqA (n2) Ans Q1 (a) (i) + 4 (ii) 19 (b) (i) + 2 (ii) 12 Q2 (a) (i) + 3 (ii) 16 (b) (i) + 5 (ii) 24

1. Complete the requested information for these two arithmetic sequences.

(a) 3 7 11 15 ...

(i) term to term rule is

<p>Scaffold</p>	5 6 7	4	5	6	7
		11
		15
	


(ii) complete the 5th term

(b) 4 6 8 10 ...

(i) term to term rule is

Scaffold

(ii) complete the 5th term



2. Complete the requested information for these two arithmetic sequences.

(a) 4 7 10 13 ...

(i) term to term rule is

<p>Scaffold</p>	5	6	7
	10
	13


(ii) complete the 5th term

(b) 4 9 14 19 ...

(i) term to term rule is

Scaffold

(ii) complete the 5th term



2. Complete the requested information for these two arithmetic sequences.

(a) 4 7 10 13 ...

(i) term to term rule is

<p>Scaffold</p>	5	6	7
	10
	13

(ii) complete the 5th term

(b) 4 9 14 19 ...

(i) term to term rule is

Scaffold

(ii) complete the 5th term

