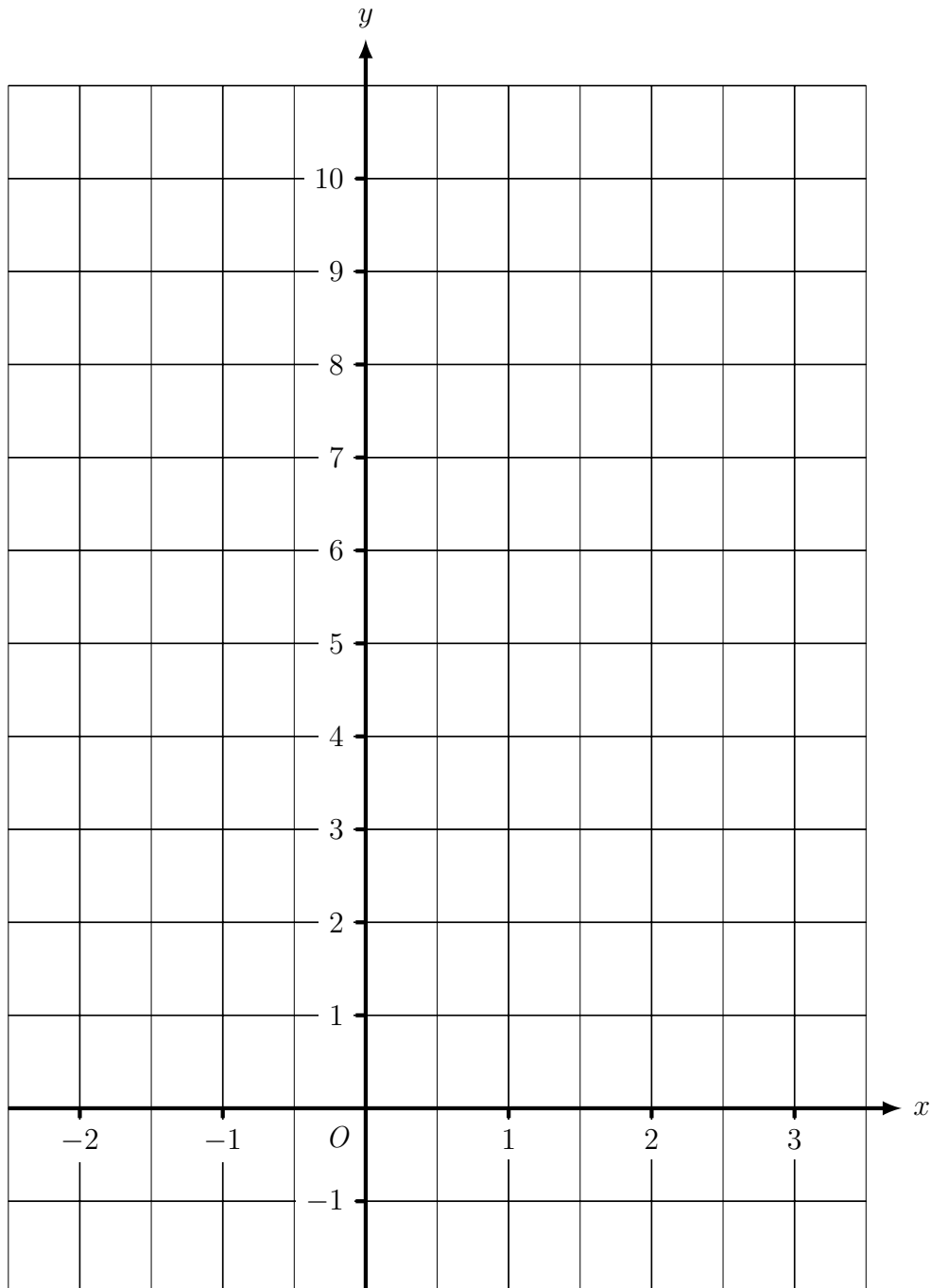


NO calculator - page 1 of 4 pages

1. (a) Complete the table of values for $y = 2x + 3$

x	-2	-1	0	1	2	3
y	-1	1	3			

- (b) On the grid, draw the line $y = 2x + 3$, for values of x from -2 to 3.



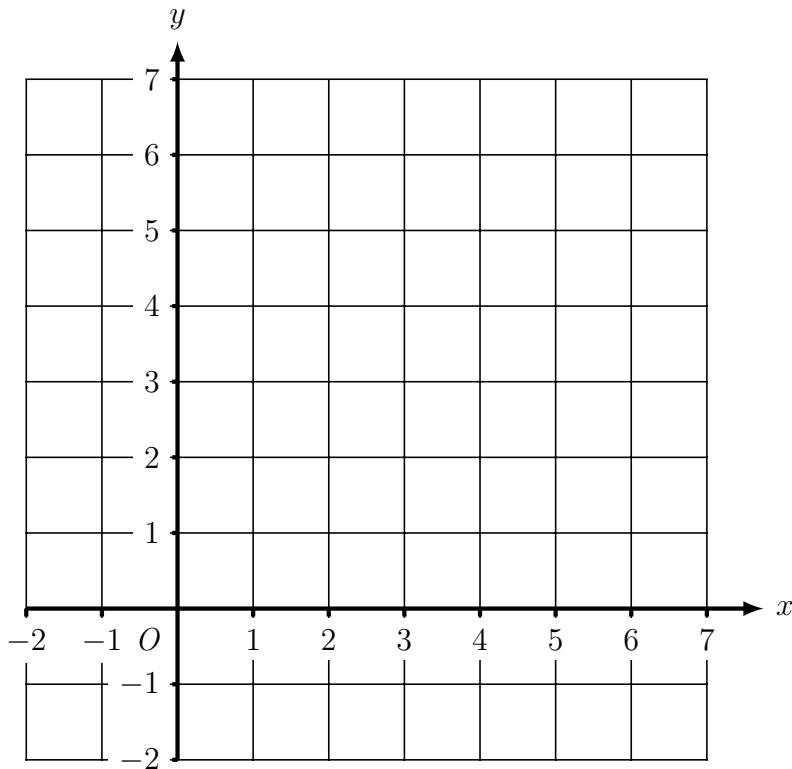
Please turn over for more questions and answers

NO calculator - page 2

2. (a) Complete the table of values for
- $x + y = 5$

x	-1	0	1	2	3	4	5
y					2	1	0

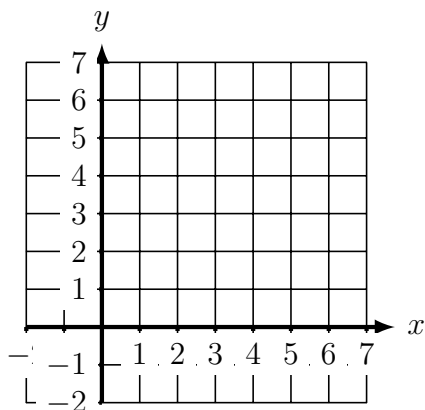
- (b) On the grid, draw the line
- $x + y = 5$
- , for values of
- x
- from -1 to 5.



3. (a) Complete the table of values for
- $y = 6$

x	-2	-1	0	1	2	3	4
y		6	6	6			

- (b) On the grid, draw the line
- $y = 6$
- , for values of
- x
- from -2 to 4.



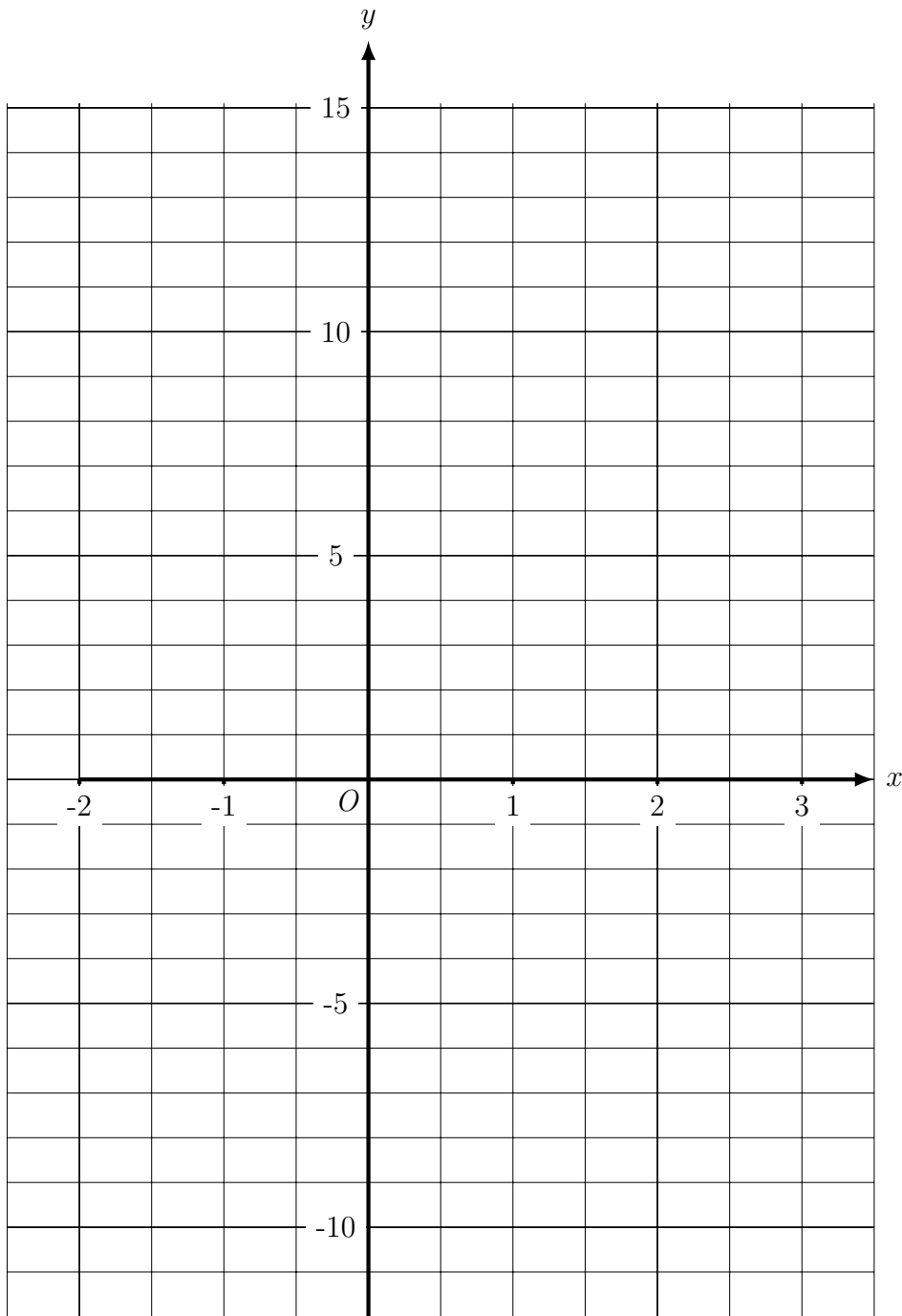
Turn over for more questions and answers

NO calculator - page 3

4. (a) Complete the table of values for
- $y = 9 - 2x$

x	-2	-1	0	1	2	3
y	13	11	9			

- (b) On the grid, draw the line
- $y = 9 - 2x$
- , for values of
- x
- from -2 to 3.

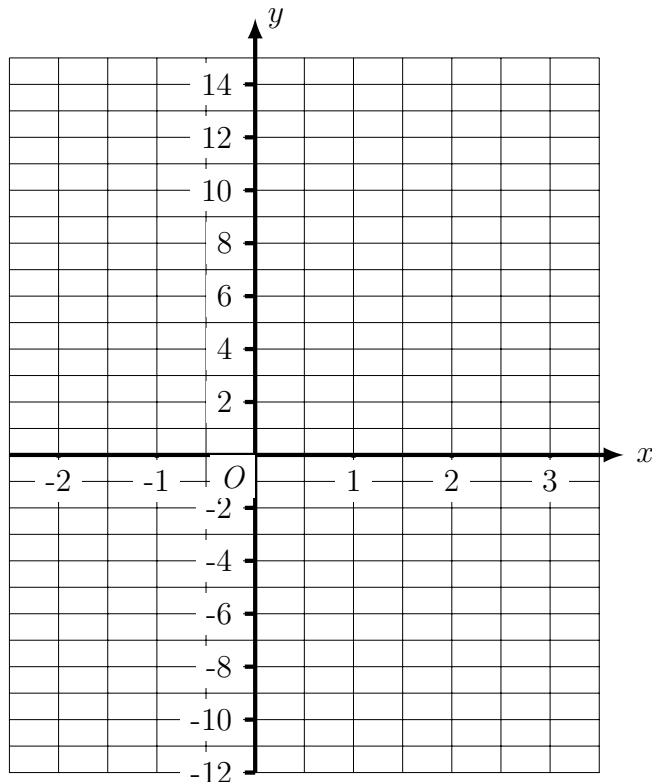


Turn over for last question and answers

5. NO calculator - page 4

(a) Complete the table of values for $y = 4x - 3$

x	-2	-1	0	1	2	3
y		-7	-3	1	5	

(b) On the grid, draw the line $y = 4x - 3$, for values of x from -2 to 3.Answers 1) $y = 2x + 3$ 2) $x + y = 5$ 3) $y = 6$ 4) $y = 9 - 2x$ 5) $y = 4x - 3$ 