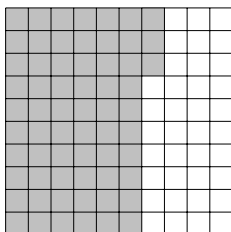


F = fraction, D = decimal, P = percentage, R = ratio\*

□ per cent means  $\frac{\square \text{ out of } 100}{100}$  or  $\frac{\square}{100}$  or  $\frac{\square}{100}$

1. Part of this 100 square is shaded.

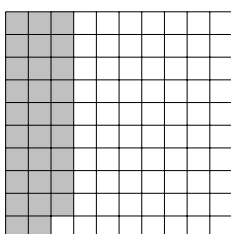


Write down the

(i) fraction shaded . . . . .

(ii) percentage shaded . . . . . %

2. Part of this 100 square is shaded.

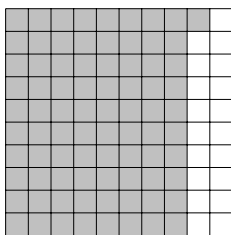


Write down the

(i) fraction shaded . . . . .

(ii) percentage shaded . . . . . %

3. Part of this 100 square is shaded.




Write down the

(i) fraction shaded . . . . .

(ii) percentage shaded . . . . . %

4. Part of this 100 square is shaded.




Write down the

(i) fraction shaded . . . . .

(ii) percentage shaded . . . . . %

5. Part of this 100 square is shaded.



Write down the

(i) fraction shaded . . . . .

(ii) percentage shaded . . . . . %